



# VELS



INSTITUTE OF SCIENCE, TECHNOLOGY & ADVANCED STUDIES (VISTAS)  
(Deemed to be University Estd. u/s 3 of the UGC Act, 1956)  
PALLAVARAM - CHENNAI

## DCMBA-21

# Quantitative Techniques



**MBA**  
ODL MODE  
(Semester Pattern)

**School of Management Studies and Commerce**

Centre for Distance and Online Education

Vels Institute of Science, Technology and Advanced Studies (VISTAS)

Pallavaram, Chennai - 600117

**Vels Institute of Science, Technology  
and Advanced Studies**

**Centre for Distance and Online Education**

**Master of Business Administration (MBA)  
ODL Mode  
(Semester Pattern)**

**DCMBA-21: Quantitative Techniques  
(4 Credits)**

---

**Course Design and Preparation Committee**

---

**Dr.P.R. Ramakrishnan**  
Dean, School of Management  
Studies and Commerce,  
VISTAS, Pallavaram, Chennai

**Dr. B.P. Chandramohan**  
Director , School of  
Management Studies and  
Commerce, VISTAS,  
Pallavaram, Chennai

**Dr. G.Rajini**  
Professor and Head,  
Department of  
Management Studies,  
VISTAS, Pallavaram,  
Chennai

---

**Course Writer**

---

**Dr.K.Sankar Singh**  
Assistant Professor,  
Department of Management  
Studies, CDOE-VISTAS,  
Pallavaram, Chennai

---

**Programme Coordinator**

---

**Dr.Sudha.S**  
Professor,  
Department of Management  
Studies, CDOE, VISTAS,  
Pallavaram, Chennai

---

**Content Editing**

---

**Dr.Ashok Kumar Katta**  
Associate Professor  
Department of Management  
Studies, CDOE-VISTAS,  
Pallavaram, Chennai

---

**Language Editing**

---

**Dr.A.A. Jayashree Prabhakar**  
Professor, Department of  
English , VISTAS, Pallavaram,  
Chennai

---

**Printing and Distribution**

---

**Ms. S.G. Chitra**  
Deputy Registrar, CDOE,  
VISTAS, Pallavaram, Chennai

**Mr.V.Kumar**  
Section Officer, CDOE,  
VISTAS, Pallavaram, Chennai

---

February 2024 (First Edition)

©Vels Institute of Science, Technology and Advanced Studies-2024

All rights reserved. No part of this work may be reproduced in any form, by mimeograph or any other means, without permission in writing from the Vels Institute of Science, Technology and Advanced Studies (VISTAS).

Further information on the VISTAS ODL Academic Programmes may be obtained from VISTAS-CDOE at Velan Nagar, P.V.Vaithiyalingam Road, Pallavaram, Chennai-600117 [or] [www.vistas.ac.in](http://www.vistas.ac.in).

Printed at:

## FOREWORD



**Dr. Ishari K Ganesh**  
**Chancellor**

Vels Institute of Science, Technology and Advanced Studies (VISTAS), Deemed-to-be University, was established in 2008 under section 3 of the Act of 1956 of the University Grants Commission (UGC), Government of India, New Delhi.

VISTAS has blossomed into a multi-disciplinary Institute offering more than 100 UG & PG Programmes, besides Doctoral Programmes, through 18 Schools and 46 Departments. All the Programmes have the approval of the relevant Statutory Regulating Authorities such as UGC, UGC-DEB, AICTE, PCI, BCI, NCTE and DGS.

Our University aims to provide innovative syllabi and industry-oriented courses, and hence, the revision of curricula is a continuous process. The revision is initiated based on the requirement and approved by the Board of Studies of the concerned Department/School. The courses are under Choice Based Credit Systems, which enables students to have adequate freedom to choose the subjects based on their interests.

I am pleased to inform you that VISTAS has been rendering its services to society to democratize the opportunities of higher education for those who are in need through Open and Distance Learning (ODL) mode.

VISTAS ODL Programmes offered have been approved by the University Grants Commission (UGC) – Distance Education Bureau (DEB), New Delhi.

The Curriculum and Syllabi have been approved by the Board of Studies, Academic Council, and the Executive Committee of the VISTAS, and they are designed to help provide employment opportunities to the students.

The MBA ODL Programme Study Materials have been prepared in the Self Instructional Mode (SIM) format as per the UGC-DEB (ODL & OL) Regulations 2020. It is highly helpful to the students, faculties and other professionals. It gives me immense pleasure to bring out the ODL programme with the noble aim of enriching learners' knowledge. I extend my congratulations and appreciation to the Programme Coordinator and the entire team for bringing up the ODL Programme in an elegant manner.

At this juncture, I am glad to announce that the syllabus of this ODL Programme has been made available on our website, [www.vistascdoe.in](http://www.vistascdoe.in), for the benefit of the student community and other knowledge seekers. I hope that this Self Learning Materials (SLM) will be a supplement to the academic community and everyone.

**CHANCELLOR**

## FOREWORD



**Dr.S.Sriman Narayanan**  
**Vice-Chancellor**

My Dear Students!

Open and Distance Learning (ODL) of VISTAS gives you the flexibility to acquire a University degree without the need to visit the campus often. VISTAS-CDOE involves the creation of an educational experience of qualitative value for the learner that is best suited to the needs outside the classroom. My wholehearted congratulations and delightful greetings to all those who have availed themselves of the wonderful leveraged opportunity of pursuing higher education through this Open and Distance Learning Programme.

Across the World, pursuing higher education through Open and Distance Learning Systems is on the rise. In India, distance education constitutes a considerable portion of the total enrollment in higher education, and innovative approaches and programmes are needed to improve it further, comparable to Western countries where close to 50% of students are enrolled in higher education through ODL systems.

Recent advancements in information and communications technologies, as well as digital teaching and e-learning, provide an opportunity for non-traditional learners who are at a disadvantage in the Conventional System due to age, occupation, and social background to upgrade their skills.

VISTAS has a noble intent to take higher education closer to the oppressed, underprivileged women and the rural folk to whom higher education has remained a dream for a long time.

I assure you all that the Vels Institute of Science, Technology and Advanced Studies would extend all possible support to every registered student of this Deemed-to-be University to pursue her/his education without any constraints. We will facilitate an excellent ambience for your pleasant learning and satisfy your learning needs through our professionally designed curriculum, providing Open Educational Resources, continuous mentoring and assessments by faculty members through interactive counselling sessions.

VISTAS, Deemed- to- be University, brings to reality the dreams of the great poet of modern times, Mahakavi Bharathi, who envisioned that all our citizens be offered education so that the globe grows and advances forever.

I hope that you achieve all your dreams, aspirations, and goals by associating yourself with our ODL System for never-ending continuous learning.

With warm regards,

**VICE-CHANCELLOR**

---

## Course Introduction

---

This Course “**DCMBA-21-Quantitative Techniques**” mainly focuses on developing the Mathematical skill for the MBA student, especially in data analysis. There should be clear, and well developed strategies for improving the overall model for any business transaction. The entire course is developed to provide an insight knowledge of resource allocation, optimization. The 20 units in the five blocks comprise the overall course of Quantitative Techniques.

**Block-1: Linear Programming** has been divided in to four Units (Unit-1 to Unit-4). Unit-1 discuss about the basic essentials of Operation research, Unit-2 deals with Linear Programming Problems (LPP) and its Formulation, Unit-3 provides an introduction to Graphical Method and the Unit-4 describes about Simplex Method.

**Block-2: Transportation and Assignment Problems** has been divided in to four Units (Unit-5 to Unit-8). Unit-5 deals with Transportation Problems, Unit-6 explains with Initial Solution: North West Corner Rule and Least Cost Method, Unit-7 presents the Initial Solution: Vogel’s Approximation Method and Unit-8 discuss with Balanced and Unbalanced Assignment Problems.

**Block-3: Network Models** has been split into four Units (Unit-9 to Unit-12). Unit- 9 discuss the Basic Terminologies, Unit-10 deals with Network Models, Unit- 11 describes about Critical Path Method (CPM) and Unit- 12 explains about Program Evaluation Review Technique (PERT).

**Block-4: Game Theory** has been split into four Units (Unit-13 to Unit-16). Unit-13 deals with Zero games and non-zero games, Unit- 14 explains about Pure and mixed strategy, Unit-15 describes about the concept of Maximin–Minimax Principle and Unit-16 explains about Dominance Property.

**Block-5: Queuing and Simulation** has been divided into four Units (Unit-17 to Unit-20). Unit- 17 deals with Queuing System, Unit-18 explains about Queuing models: Birth and Death Model, Unit-19 speaks bout simulation and Unit-20 discuss about Simulation Models.

## DCMBA-21: Quantitative Techniques

S.No.	Particulars	Page No
<b>Block-1 : Linear Programming</b>		
Unit-1	Operations Research	8
Unit-2	Linear Programming Problems (LPP) and its Formulation	16
Unit-3	Graphical Method	22
Unit-4	Simplex Method	28
<b>Block-2: Transportation and Assignment</b>		
Unit-5	Transportation Problems	38
Unit-6	Initial Solution: North West Corner Rule and Least Cost Method	42
Unit-7	Initial Solution: Vogel's Approximation Method	49
Unit-8	Balanced and Unbalanced Assignment Problems	54
<b>Block-3: Network Models</b>		
Unit- 9	Basic Terminologies	68
Unit -10	Network Models	77
Unit -11	Critical Path Method (CPM)	84
Unit -12	Programme Evaluation Review Technique (PERT)	91
<b>Block-4: Game Theory</b>		
Unit-13	Zero-sum games and Non-zero sum games	103
Unit-14	Pure and Mixed Strategy	112
Unit-15	Maximin–Minimax Principle	116
Unit -16	Dominance Property	120
<b>Block-5: Queuing and Simulation</b>		
Unit -17	Queuing System	127
Unit-18	Queuing models: Birth and Death Model	132
Unit-19	Simulation	136
Unit-20	Simulation Models	140
<b>Annexure-Case studies</b>		145
<b>Plagiarism Certificate</b>		152

---

## **Block-1: Introduction**

---

**Block-1: Linear Programming** has been divided in to four Units.

**Unit-1: Operations Research** explains about Introduction, Tools and Techniques, Operations Research Models and Applications.

**Unit-2: Linear Programming Problems (LPP) and its Formulation** describes about Introduction of LPP, Mathematical Formulation of Linear, Programming Problem, Steps for formulation of Linear Programming Problem and Solved Problem.

**Unit-3: Graphical Method presents** about the Introduction of Graphical Methods, Steps for solving the Linear Programming Problem using the graphical method and Solved Problem

**Unit-4: Simplex Method** deals with Introduction of Simplex Method, Steps for solving the Linear Programming Problem using the simplex method and Solved Problem.

In all the units of Block -1 **Linear Programming**, the Check your progress, Glossary, Answers to Check your progress and Suggested Reading has been provided and the Learners are expected to attempt all the Check your progress as part of study.



# Unit-1

---

## Operations Research

### STRUCTURE

Overview

Objectives

1.1. Introduction

1.2. Tools and Techniques

1.3. Operations Research Models

1.4. Applications

Let Us Sum Up

Check Your Progress

Glossary

Answers to Check Your Progress

Suggested Readings

---

### Overview

In this units we are going to discuss the tools, operations research models, applications of Operations Research. An overall view of the history of Operation research is given here.

---

### Objectives

After studying this unit, the students will be able to

- understand the meaning, tools, model and
- the applications of Operations Research.

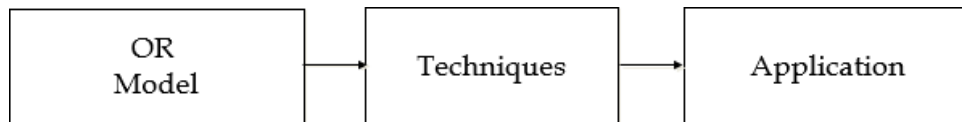
---

### 1.1. Introduction

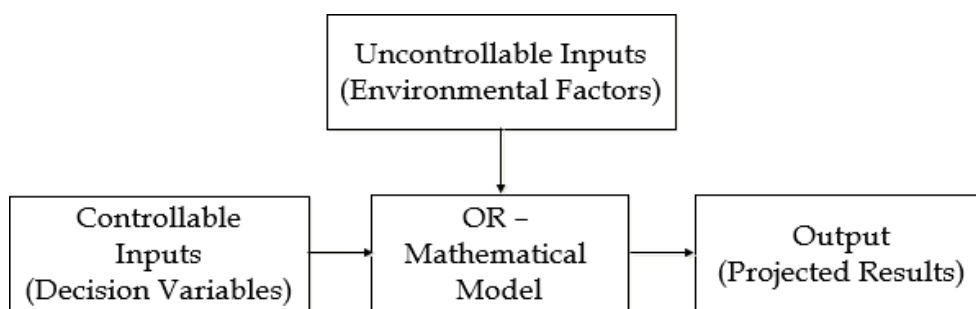
Operations research is defined as the scientific process of transforming data into insights to making better decisions. It starts when mathematical and quantitative techniques are used to substantiate the decision being taken. The main activity of a manager is the decision making. In our daily life we make the decisions even without noticing them. The decisions are taken simply by common sense, judgment and expertise without using any mathematical or any other model in simple situations. But the decision we are concerned here with are complex and heavily responsible. Examples are public transportation network planning in a city having its own layout of factories, residential blocks or finding the appropriate product mix when there exists a large number of products

with different profit contributions and production requirement etc. Operations research is decision-making tool that seeks for the best outcomes while keeping in mind the organization's overall goals and limits.

### Operations Research Models



Model is an abstract representation of reality. The following factors can be used to classify models:



### Abstraction (Degree)

#### I. Mathematical Models

The mathematical model is one which employs a set of mathematical symbols to represent the decision variables of the system. These variables are related together by means of a mathematical equation or a set of equations to describe the properties of the system. The solution of the problem is then obtained by applying well-developed mathematical techniques to the model.

#### ii. Analogue Models

The models in which one set of properties is used to represent another set of properties are called analogue models.

#### Goal:

#### i. Descriptive Models

A descriptive model simply describes some aspects of a situation based on observations, survey, questionnaire results or other available data. The result of an opinion poll represents a descriptive model.

## **ii. Predictive Models**

Predictive model is one which predicts something based on some data. Predicting election results before the counting is completed.

### **Nature of Environment:**

#### **i. Deterministic Models**

Deterministic models are a model which does not take uncertainty into account.

#### **ii. Probabilistic Models**

These types of models usually handle such situations in which the consequences or payoff of managerial actions cannot be predicted with certainty. However, it is possible to forecast a pattern of events, based on which managerial decisions can be made.

### **Time Horizon:**

#### **i. Static Models**

These models do not consider the impact of changes that takes place during the planning horizon, i.e. they are independent of time. Also, in a static model only one decision is needed for the duration of a given time.

#### **ii. Dynamic Models**

In these models, time is considered as one of the important variables and admits the impact of changes generated by time. Also, in dynamic models, not only one but series of independent decisions is required during the planning horizon.

---

## **1.2. Tools and Techniques**

---

Operations Research uses any suitable tools or techniques available. The common frequently used tools/techniques are mathematical procedures, cost analysis, electronic computation. However, operations researchers given special importance to the development and the use of techniques like linear programming, game theory, decision theory, queuing theory, inventory models and simulation. In addition to the above techniques, some other common tools are non-linear programming, integer programming, dynamic programming, sequencing theory, Markov process, network scheduling (PERT/CPM), symbolic Model, information theory, and value theory. There is many other Operations Research tools/techniques also exists. The brief explanations of some of the above techniques/tools are as follows:

- Linear Programming: This is a constrained optimization technique, which optimizes some criterion within some constraints. In Linear programming the objective function (profit, loss or return on investment) and constraints are linear. There are different methods available to solve linear programming.
- Game Theory: This is used for making decisions under conflicting situations where there are one or more players/opponents. In this the motives of the players are dichotomized. The success of one player tends to be at the cost of other players and hence they are in conflict.
- Decision Theory: Decision theory is concerned with making decisions under conditions of complete certainty about the future outcomes and under conditions such that we can make some probability about what will happen in the future.
- Queuing Theory: This is used in situations where the queue is formed (for example customers waiting for service, aircrafts waiting for landing, jobs waiting for processing in the computer system, etc.). The objective here is minimizing the cost of waiting without increasing the cost of servicing.
- Inventory Models: Inventory models make decisions that minimize total inventory cost. This model successfully reduces the total cost of purchasing, carrying, and out of stock inventory.
- Network Scheduling: This technique is used extensively to plan, schedule, and monitor large projects (for example computer system installation, R&D design, construction, maintenance, etc.). The aim of this technique is to minimize trouble spots (such as delays, interruptions, production bottlenecks, etc.) by identifying the critical factors. The different activities and their relationships of the entire project are represented diagrammatically with the help of networks and arrows, which is used for identifying critical activities and paths. There are two main types of techniques in network scheduling, they are:
  - Program Evaluation and Review Technique (PERT): It is used when activities' time is not known accurately/only probabilistic estimates of time are available.
  - Critical Path Method (CPM): It is used when activities' time is not accurate.

Deterministic Models – assume all data are known with certainty

- Linear Programming
- Network Optimization
- Integer Programming
- Inventory models
- Replacement models

Stochastic Models – explicitly represent uncertain data (random variables or stochastic processes)

- Queuing
- Game Theory
- Inventory models
- Simulation
- Markov Chains

#### **Techniques – Basic**

- Linear Programming – Graphical, Simplex, Dual
- Network Optimization – Transportation, Assignment, CPM, PERT
- Inventory models – Deterministic
- Replacement models
- Queuing models
- Simulation – Monte-Carlo

#### **Techniques – Advanced**

- Linear Programming – Revised Simplex, Primal-Dual
- Network Optimization – Minimal Spanning Tree, Shortest Path Algorithms, Maximal Flow Problems or Algorithms, Minimum Cost Flow
- Game theory
- Inventory models – Stochastic
- Simulation – Discrete-Event
- Integer Programming
- Dynamic Programming

---

## **1.2. Applications**

---

Today, almost all fields of business and government utilizing the benefits of Operations Research. There are voluminous of applications of Operations Research. The following are the abbreviated set of typical operations research applications to show how widely these techniques are used today:

### **Accounting**

- Assigning audit teams effectively
- Credit policy analysis
- Cash flow planning Developing standard costs
- Establishing costs for by products
- Planning of delinquent account strategy
- Construction
- Project scheduling, monitoring and control
- Determination of proper work force
- Deployment of work force
- Allocation of resources to projects
- Facilities Planning
- Factory location and size decision
- Hospital planning
- International logistic system design
- Transportation loading and unloading
- Warehouse location decision

### **Finance**

- Building cash management models
- Allocating capital among various alternatives
- Building financial planning models
- Investment analysis
- Portfolio analysis
- Dividend policy making

## **Marketing**

- Advertising budget allocation
- Product introduction timing
- Deciding most effective packaging alternative

## **Organizational Behavior**

- Personnel planning
- Recruitment of employees
- Skill balancing
- Training program scheduling
- Designing organizational structure more effectively

## **Research and Development**

- R&D Projects control
- R&D Budget allocation
- Planning of Product introduction

---

## **Let us sum up**

---

In this unit, the students have learned about the meaning, tools, model and the applications of Operations Research.

---

## **Check your Progress**

---

1. Operations Research approach is?

- a. multi-disciplinary
- b. scientific
- c. intuitive
- d. collect essential data

2. Operation research approach is typically based on the use of

- \_\_\_\_\_.
- a. physical model
  - b. mathematical model
  - c. iconic model
  - d. descriptive model

3. Mathematical model of linear programming problem is important because \_\_\_\_\_

- a. it helps in converting the verbal description and numerical data into a mathematical expression
- b. decision-makers prefer to work with formal models
- c. it captures the relevant relationship among decision factors
- d. it enables the use of algebraic technique

---

### **Glossary**

---

<b>Operations research:</b>	The scientific process of transforming data into insights to making better decisions.
<b>Mathematical model:</b>	A set of mathematical symbols to represent the decision variables of the system.
<b>Optimization:</b>	The selection of a best element, with regard to some criterion, from some set of available alternatives.

---

### **Answers to Check Your Progress**

---

- 1.a
- 2.b
- 3.c

---

### **Suggested Readings**

---

- 1. Frederick Hillier, Gerald J. Lieberman, Bodhibroto Nag, Preetam Basu, "Introduction to Operation Research", McGraw Hill, 11th edition, ISSN: 9354601200, 2021.
- 2. Sankar P. Iyer, Operations Research, Tata McGraw-Hill Education, 2008



## Unit-2

---

# Linear Programming Problems (LPP) and its Formulation

### STRUCTURE

Overview

Objectives

2.1. Introduction

2.2. Mathematical Formulation of Linear Programming Problem

2.3. Steps for formulation of Linear Programming Problem

2.4. Solved Problem

Let Us Sum Up

Check Your Progress

Glossary

Answers to Check Your Progress

Suggested Readings

---

### Overview

---

In this section we are going to learn about the linear programming problem and its applications. Formulation of the LPP is also going to be learnt in this section.

---

### Objectives

---

After studying this unit, the students are able to

- identify the characteristics of Linear Programming Problem and
  - formulate a Linear Programming Problem.
- 

### 2.1. Introduction

---

Linear Programming is a special and versatile technique which can be applied to a variety of management problems viz. Advertising, Distribution, Investment, Production, Refinery Operations, and Transportation analysis. The linear programming is useful not only in industry and business but also in non-profit sectors such as Education, Government, Hospital, and Libraries. The linear programming method is applicable in problems characterized by the presence of decision variables.

The objective function and the constraints can be expressed as **linear functions** of the **decision variables**. The decision variables represent quantities that are, in some sense, controllable inputs to the system being modeled. An objective function represents some principal objective criterion or goal that measures the effectiveness of the system such as maximizing profits or productivity, or minimizing cost or consumption. There is always some practical limitation on the availability of resources viz. man, material, machine, or time for the system. These constraints are expressed as linear equations involving the decision variables. Solving a linear programming problem means determining actual values of the decision variables that optimize the objective function subject to the limitation imposed by the constraints.

The main important feature of linear programming model is the presence of linearity in the problem. The use of linear programming model arises in a wide variety of applications. Some model may not be strictly linear, but can be made linear by applying appropriate mathematical transformations. Still some applications are not at all linear, but can be effectively approximated by linear models. The ease with which linear programming models can usually be solved makes an attractive means of dealing with otherwise intractable nonlinear models.

---

## **2.2. Mathematical Formulation of Linear Programming Problem (LPP)**

---

It is defined as the process of considering various inequalities in a situation and estimating the best value that may be obtained under those circumstances. The basic components of the LP are as follows:

### **i. Decision Variables**

The variables whose values determined the solution of a problem are called **decision variables** of the problem.

### **ii. Constraints**

Subject to a set of simultaneous linear equations (or inequalities) known as constraints.

### **iii. Objective Functions**

Linear programming problem deals with the optimization (maximization or minimization) of a function of decision variables known as objective function.

If  $x_j (j = 1, 2, 3, \dots, n)$ , the  $n$  decision variables and if the system is subject to  $m$  Constraints, then the general Mathematical model can be written in the form:

$$(or) \text{Minimize } Z = (x_1, x_2, x_3, \dots, x_n)$$

Subject to  $c_i(x_1, x_2, x_3, \dots, x_n) \leq or = or \geq b_i (i = 1, 2, 3, \dots, m)$  called Structural constraints and  $x_1, x_2, x_3, \dots, x_n \geq 0$  called the non-negative restrictions.

### 2.3. Steps for formulation of Linear Programming Problem

- Step 1:** Identify the unknown decision variables to be determined and assign symbols to them.
- Step 2:** Identify all the restrictions or constraints in the problem and express them as linear equations or inequalities of decision variables.
- Step 3:** Identify the aim (or) objective and represent it also as a linear function of decision variables.
- Step 3:** Express the complete formulation of LPP as a general mathematical model.

### 2.4. Solved Problem

**Problem 1:** A firm produces three products. These products are processed on three different machines. The time required to manufacture one unit of each of the three products and the daily capacity of the three machines are given in the table below.

Machine	Time per unit (minutes)			Machine capacity (Minutes/day)
	Product 1	Product 2	Product 3	
M1	2	3	2	440
M2	4	-	3	470
M3	2	5	-	430

It is required to determine the number of units to be manufactured for each product daily. The profit per unit of product 1, 2 and 3 is Rs. 4/-, Rs.3/- and Rs.6/- respectively. Formulate the problem as a Linear Programming Problem (LPP).

**Solution:**

1. Decision Variables:

$x_1$  be the no. of product 1 to be produced

$x_2$  be the no. of product 2 to be produced

$x_3$  be the no. of product 3 to be produced

2. Objective Function

$Max Z = 4x_1 + 3x_2 + 6x_3$  Constraints – Resources and Non-negativity

Non-negativity

$2x_1 + 3x_2 + 2x_3 \leq 440$

$4x_1 + 0x_2 + 3x_3 \leq 470$

$2x_1 + 5x_2 + 0x_3 \leq 430$

$x_1, x_2, x_3 \geq 0$

Mathematical Model Subject to

$Max Z = 4x_1 + 3x_2 + 6x_3$   $2x_1 + 3x_2 + 2x_3 \leq 440$

$4x_1 + 3x_3 \leq 470$

$2x_1 + 5x_2 \leq 430$

$x_1, x_2, x_3 \geq 0$

**Problem 2:** A company produces three products that are processed on three different machines. It is required to determine the number of units to be manufactured for each product daily. The cost per unit of product 1, 2 and 3 is Rs. 45/-, Rs. 50/- and Rs. 65/- respectively. The time required to manufacture one unit of each of the two products and the daily capacity of the three machines are given in the table below.

Machine	Time per unit (minutes)			Machine capacity (Minutes/day)
	Product 1	Product 2	Product 3	
M1	2	3	2	440
M2	4	-	3	470
M3	2	5	-	430

**Solution:**

1. Decision Variables:

2. Objective Function
3.  $x_1$  be the no. of product 1 to be produced  
 $x_2$  be the no. of product 2 to be produced  
 $x_3$  be the no. of product 3 to be produced  
 $Min Z = 45x_1 + 50x_2 + 65x_3$
4. Constraints – Resources and Non-negativity
  - $2x_1 + 3x_2 + 2x_3 \geq 440$
  - $4x_1 + 0x_2 + 3x_3 \geq 470$
  - $2x_1 + 5x_2 + 0x_3 \geq 430$
  - Non-negativity
  - Mathematical Model Subject to

### Let us Sum Up

$$x_1, x_2, x_3 \geq 0$$

$$Min Z = 45x_1 + 50x_2 + 65x_3 \quad 2x_1 + 3x_2 + 2x_3 \geq 440$$

$$4x_1 + 3x_3 \geq 470$$

$$2x_1 + 5x_2 \geq 430$$

$$x_1, x_2, x_3 \geq 0$$

In this unit, the students have learned to identify the characteristics of Linear Programming Problem and formulate a Linear Programming Problem.

### Check your Progress

1. Operation research approach is D

- a. Multi-disciplinary
- b. Artificial
- c. Intuitive
- d. All of the above

2. A constraint in an LP model restricts D

- a. value of the objective function
- b. value of the decision variable
- c. use of the available resources
- d. all of the above

### 3.A feasible solution of LPP A

- a. Must satisfy all the constraints simultaneously
- b. Need not satisfy all the constraints, only some of them
- c. Must be a corner point of the feasible region
- d. all of the above

---

## Glossary

---

**Linear Programming:** A constrained optimization technique, which optimize some criterion within some constraints.

**Decision Variables:** The variables whose values determined the solution of a problem are called decision variables of the problem.

**Constraints:** A set of simultaneous linear equations (or inequalities) known as constraints.

---

## Answers to let us sum up

---

1.d

2.d

3.a

---

## Suggested Readings

---

1. Frederick Hillier, Gerald J. Lieberman, Bodhibroto Nag, Preetam Basu, "Introduction to Operation Research", McGraw Hill, 11th edition, ISSN: 9354601200, 2021.
2. Sankar P. Iyer, Operations Research, Tata McGraw-Hill Education, 2008

## Unit-3

---

### Graphical Method

#### **STRUCTURE**

Overview

Objectives

3.1. Introduction

3.2. Steps for solving the Linear Programming Problem using the graphical method

3.3. Solved Problem

Let Us Sum Up

Check Your Progress

Glossary

Answers to Check Your Progress

Suggested Readings

---

#### **Overview**

In this unit we are going to discuss about the graphical method through which we can formulate the LPP. Using this technique we can solve the given problems in an effective manner.

---

#### **Objectives**

After studying this unit, the students are able to

- solve a Linear Programming Problem using the graphical method.

---

#### **3.1. Introduction**

A graphical method that provides a pictorial description of the problems and their solutions, as well as the basic factors involved in solving general LPP involving any finite number of variables, may effectively solve LPP involving only two variables. The Linear Programming with two variables can be solved graphically. The graphical method of solving linear programming problem is of limited application in the business problems as the number of variables is substantially large. If the linear programming problem has larger number of variables, the suitable method for solving is Simplex Method. The simplex method is an iterative process, through which it reaches ultimately to the minimum or maximum value of the objective function.

---

### 3.2. Steps for solving the Linear Programming Problem using the graphical method

---

- Step 1:** Consider the inequality constraints as equalities. In the XOY plane, draw the straight lines that correspond to each equality and non-negativity restriction by putting  $x_1 = 0$ , we get  $x_2$  and  $x_2 = 0$  we get  $x_1$ .
- Step 2:** Find the bounded region for the variables values, which is the region bounded by the lines established in step 1.
- Step 3:** Find the point of intersection of the bounded lines by solving the equations of the corresponding lines, and substituting these points in the objective function to get the values of the objective function.
- Step 4:** For maximization problem, the maximum value of Z is the optimum value. For minimization problem, the minimum value of Z is the optimum value.

---

### 3.3. Solved Problem

---

**Problem 1: Solve the following LPP using Graphical Method.**

$$\text{Max } Z = 3x_1 + 2x_2$$

$$\text{Subject to } -2x_1 + x_2 \leq 1$$

$$x_1 \leq 2$$

$$x_1 + x_2 \leq 3 \text{ and } x_1, x_2 \geq 0$$

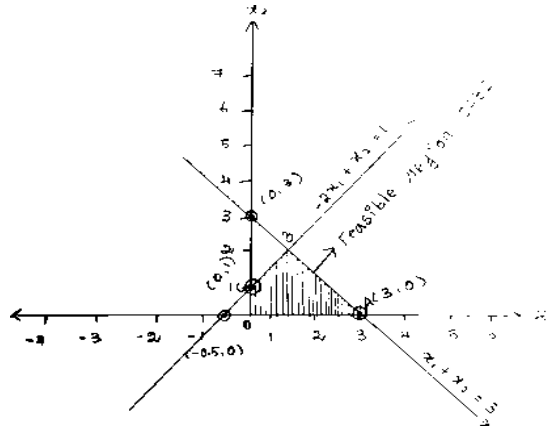
**Solution:**

Consider the inequality constraints as equalities.

$-2x_1 + x_2 = 1$	
Put $x_1 = 0$ $x_2 = 1$ $\Rightarrow (0, 1)$	Put $x_2 = 0$ $x_1 = -0.5$ $\Rightarrow (-0.5, 0)$

$x_1 + x_2 = 3$	
Put $x_1 = 0$ $x_2 = 3$ $\Rightarrow (0, 3)$	Put $x_2 = 0$ $x_1 = 3$ $\Rightarrow (3, 0)$





The feasible region is also known as solution space of the LPP. Every point within this area satisfies all the constraints.

Vertex	Value of Z
O(0,0)	0
<b>A(2,0)</b>	<b>6</b>
B(2/3,7/3)	20/3
C(0,1)	2

Since the problem is of maximization type, the optimum solution is

$$\mathbf{MaxZ = 6, x_1 = 2, x_2 = 0}$$

**Problem 2: Solve the following LPP using Graphical Method.**

$$\mathbf{MinZ = 4x_1 + 2x_2}$$

$$\mathbf{Subject\ to\ } x_1 + 2x_2 \geq 2$$

$$3x_1 + x_2 \geq 3$$

$$4x_1 + 3x_2 \geq 6$$

$$\mathbf{and\ } x_1, x_2 \geq 0$$

**Solution:**

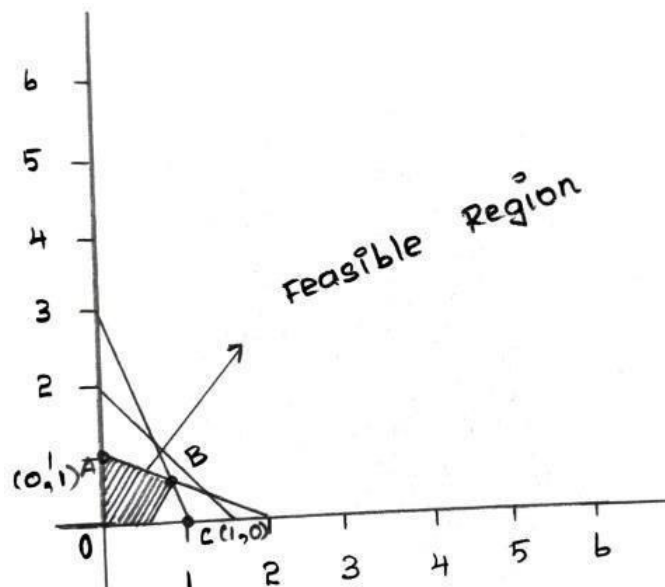
Consider the inequality constraints as equalities.

$x_1 + 2x_2 = 2$	
Put $x_1 = 0$ $x_2 = 1$ $\Rightarrow (0,1)$	Put $x_2 = 0$ $x_1 = 2$ $\Rightarrow (2,0)$

$3x_1 + x_2 = 3$	
Put $x_1 = 0$ $x_2 = 3$ $\Rightarrow (0,3)$	Put $x_2 = 0$ $x_1 = 1$ $\Rightarrow (1,0)$

\*

$4x_1 + 3x_2 = 6$	
Put $x_1 = 0$ $x_2 = 2$ $\Rightarrow (0,2)$	Put $x_2 = 0$ $x_1 = 1.5$ $\Rightarrow (1.5, 0)$



The feasible region is also known as solution space of the LPP. Every point within this area satisfies all the constraints.

Vertex	Value of Z
O(0,0)	0
<b>A(0,1)</b>	<b>2</b>
B(0.8,0.6)	4.4
C(1,0)	4

Since the problem is of minimization type, the optimum solution is

$$\mathbf{MinZ = 2, x_1 = 0, x_2 = 1}$$

---

## Let us Sum Up

---

In this unit, the students have learned to solve a Linear Programming Problem using the graphical method.

---

## Check your progress

---

1. The linear function of the variables which is to be maximize or minimize is called \_\_\_\_\_
  - a. Constraints
  - b. Objective function
  - c. Decision variable
  - d. None of the above
2. A physical model is an example of \_\_\_\_\_
  - a. An iconic model
  - b. An analogue model
  - c. A verbal model
  - d. A mathematical model
3. A model is \_\_\_\_\_
  - a. An essence of reality
  - b. An approximation
  - c. An idealization
  - d. All of the above

---

## Glossary

---

**Graphical Method:** A pictorial description of the problems and their solutions, as well as the basic factors involved in solving general LPP involving any finite number of variables, may effectively solve LPP involving only two variables.

---

**Answers to check your Progress**

---

- 1. b
- 2. c
- 3. d

---

**Suggested Readings**

---

1. Frederick Hillier, Gerald J. Lieberman, Bodhibroto Nag, Preetam Basu, "Introduction to Operation Research", McGraw Hill, 11th edition, ISSN: 9354601200, 2021.
2. Sankar P. Iyer, Operations Research, Tata McGraw-Hill Education, 2008

# Unit-4

---

## Simplex Method

### STRUCTURE

Overview

Objectives

4.1. Introduction

4.2. Steps for solving the Linear Programming Problem using the simplex method

4.3. Solved Problem

Let Us Sum Up

Check Your Progress

Glossary

Answers to Check Your Progress

Suggested Readings

---

### Overview

---

In this chapter we are going to deal with the simplex method and the problems related to it. It is a simple method of LPP.

---

### Objectives

---

After studying this unit, the students are able to

- solve a Linear Programming Problem using the simplex method.
- 

### 4.1. Introduction

---

- Simplex Method is a mathematical procedure to solve the LPP involving more than two decision variables ( $x_1, x_2, \dots$  to any number of variables)
  - It is the Standard technique in linear programming for solving an optimization problem, typically one involving a objective function and several constraints expressed as inequalities.
  - It is developed to help solve large and real-world linear programming problems.
- 

### 4.2. Steps for solving the Linear Programming Problem using the Simplex method

---

- It involves use of variables such as surplus, slack and artificial.

- It deals only with a small and unique set of feasible solutions (corner points).
- It is an iterative procedure carried systematically to determine the optimal solution from the set of feasible solutions.

**Step 1:** Check whether the objective function is to be maximized or minimized. If it is to be minimized, then convert it into a maximization type by Minimize  $Z = -$  Maximize  $(-Z)$

**Step 2:** Check whether all RHS are positive. If any one of the RHS is negative, then multiply both sides of the constraint by -1.

**Step 3:** Convert inequality into equality constraints by introducing slack/surplus variables. **Step 4:** In the initial simplex table, take  $x_1 = 0$  and  $x_2 = 0$  so that  $z = 0$  and the simplex table is as follows:

$(C_1 C_2 C_3 \dots 000 \dots)$

$C_B Y_B$	$X_B$	$x_1 x_2 x_3$	.....	$s_1 s_2 s_3$	.....
$C_{B1} s_1$	$b_1$	$a_{11} a_{12} a_{13}$	.....	1	0 0 .....
$C_{B1} s_2$	$b_2$	$a_{21} a_{22} a_{23}$	.....	0	1 0 .....
$C_{B1} s_3$	$b_3$	$a_{31} a_{32} a_{33}$	.....	0	0 1 .....
:	:	:	:	:	.....
:	:			.....	
:		:	:	:	.....
:				.....	
$(Z_j - C_j)$	$Z_0$	$Z_1 - C_1$	$Z_2 - C_2$	...	.....
				...	

Where  $C_j$ - row denotes the coefficients of the variables in the objective function

$C_B$ - Column denotes the coefficients of the basic variables in the objective function

$Y_B$ - Column denotes the basic variables

$X_B$ - Column denotes the values of the basic variables.

**Step 5:** Compute the net evaluations  $(Z_j - C_j)$

If all  $(Z_j - C_j) \geq 0$  then the current basic feasible solution is optimal otherwise it is not optimal, go to next step.

**Step 6: To find the entering variable** - If more than one variable has the same most negative  $(Z_j - C_j)$ , any of these variables may be selected arbitrarily as the entering variables. The entering variable column is called as the key column or pivot column.

**Step 7: To find the leaving variable** - The ration between the solution column and the entering variable column by considering only positive denominators and is defined as

$$\theta = \text{Min} \{x_{Bi}, a_{ir} > 0\}$$

If  $a_{ir} \leq 0$ , then there is an unbounded solution to the given LPP.

The leaving variable row is called the **key row or pivot row or pivot equation**, and the element at the intersection of the pivot column and the pivot row is called the **pivot element**.

**Step 8:** Drop the leaving variable and introduce the entering variable along with its associated value under  $C_B$  column.

New pivot equation = Old pivot equation / pivot element  
New equation (all other rows including  $(Z_j - C_j)$  row)

$$= (\text{Old equation}) - \{(\text{Corresponding column coefficient}) \times (\text{New pivot equation})\}$$

**Step 9:** Go to step 5 and repeat the procedure until either an optimum solution is bounded or there is an indication of an unbounded solution.

**Note 1: For maximization problem:**

- i. If all  $(Z_j - C_j) \geq 0$ , then the current basic feasible solution is optimal.  
If at least one  $(Z_j - C_j) < 0$ , then the current basic feasible solution is not optimal.
- ii. The entering variable is the non-basic variable corresponding to the most negative value of  $(Z_j - C_j)$ .

**Note 2: For minimization problem:**

- i. If all  $(Z_j - C_j) \leq 0$ , then the current basic feasible solution is optimal.  
If at least one  $(Z_j - C_j) > 0$ , then the current basic feasible solution is not optimal.
- ii. The entering variable is the non-basic variable corresponding to the most positive value of  $(Z_j - C_j)$ .

### 4.3. Solved Problem

**Problem 1: Solve the following LPP using Simplex Method**

**Maximize**  $Z = 21x_1 + 15x_2$

**Subject to the constraints**

$-x_1 - 2x_2 \geq -6$

$4x_1 + 3x_2 \leq 12$  and  $x_1, x_2 \geq 0$

**Solution:**

**Step (1):** In first inequality, RHS is negative, so multiply both sides of that constraint by -1 so as to make its RHS positive.

**Step (2):** By introduce the slack variables  $s_{1,2}$ , the problem in standard form becomes

Maximize  $Z = 21x_1 + 15x_2 + 0s_1 + 0s_2$

Subject to

$x_1 + 2x_2 + s_1 = 6$   $4x_1 + 3x_2 + s_2 = 12$  and  $x_1, x_2, s_1, s_2 \geq 0$

**Step (3):** Put  $x_1 = 0$  and  $x_2 = 0$  in equation 1 and 2, we get the initial basic feasible solution is  $s_1 = 6$  and  $s_2 = 12$

**Step (4): Initial Iteration**

The initial simplex table is given by

$C_j$			21	15	0	0	Ratio $\theta = \frac{X_{Bi}}{a_{ir}} = \text{Min} \{, a_{ir} > 0\}$
$C_B$	$Y_B$	$X_B$	$x_1$	$x_2$	$s_1$	$s_2$	
0	$s_1$	6	1	2	1	0	$\frac{6}{1} = 6$
0	$s_2$	12	4	3	0	1	$\frac{12}{3} = 4$
$Z_j$		0	0	0	0	0	
$Z_j - C_j$		0	-21	-15	0	0	

Since  $Z_j - C_j < 0$ , the current basic feasible solution is not optimal.

Since  $Z_j - C_j = -21$  is most negative, the corresponding non-basic variable  $x_1$  enters into the basis and the leaving variable is the basic variable  $s_2$  which corresponds to the minimum ratio  $\theta = 4$ . Here the pivot element is 4

**Step (5): First Iteration**

New Pivot equation = Old pivot equation  $\div$  Pivot element

$= (12 \ 4 \ 3 \ 0 \ 1) \div (4) = (3 \ 1 \ 3/4 \ 0 \ 1/4)$



$$\begin{aligned} \text{New } s_1 \text{ equation} &= (\text{Old } s_1 \text{ equation}) - \{(\text{Corresponding column coefficient}) \times (\text{New Pivot equation})\} \\ &= (6 \ 12 \ 1 \ 0) - \{ (1) \times ((3 \ 1 \ \frac{3}{4} \ 0 \ \frac{1}{4})) \} \\ &= (3 \ 05/41 \ -1/4) \end{aligned}$$

$C_j$			21	15	0	0
$C_B$	$Y_B$	$X_B$	$x_1$	$x_2$	$s_1$	$s_2$
0	$s_1$	3	0	5	1	-1
				$\frac{5}{4}$		$\frac{-1}{4}$
21	$x_1$	3	1	3	0	1
				$\frac{3}{4}$		$\frac{1}{4}$
$Z_j$		63	21	63	0	21
				$\frac{63}{4}$		$\frac{21}{4}$
$Z_j$		0	0	3	0	21
$-C_j$				$\frac{3}{4}$		$\frac{21}{4}$

Since all  $Z_j - C_j \geq 0$ , then the current basic feasible solution is optimal.

∴ The optimal solution is Max  $Z = 63$ ,  $x_1 = 3$  and  $x_2 = 0$ .

### Example 2: Solve the following LPP using Simplex Method

**Minimize  $Z = 8x_1 - 2x_2$**

**Subject to the constraints**

$$-4x_1 + 2x_2 \leq 1$$

$$5x_1 - 4x_2 \leq 3 \text{ and } x_1, x_2 \geq 0$$

**Solution:**

**Step (1):** Since the given objective function is of minimization type, we shall convert it into a maximization type as follows:

$$\text{Maximize } (-Z) = \text{Maximize } Z^* = -8x_1 + 2x_2$$

**Step (2):** By introduce the slack variables  $s_1, s_2$ , the problem in standard form becomes Maximize  $Z^* = -8x_1 + 2x_2 + 0s_1 + 0s_2$

Subject to

$$-4x_1 + 2x_2 + s_1 = 1$$

$$5x_1 - 4x_2 + s_2 = 3 \text{ and } x_1, x_2, s_1, s_2 \geq 0$$

**Step (3):** Put  $x_1 = 0$  and  $x_2 = 0$  in equation 1 and 2, we get the initial basic feasible solution is  $s_1 = 1$  and  $s_2 = 3$

**Step (4): Initial Iteration**

The initial simplex table is given by

$C_j$			-8	2	0	0	Ratio $X_{Bi}\theta = \text{Min} \{, a_{ir} / a_{ir} > 0\}$
$C_B$	$Y_B$	$X_B$	$x_1$	$x_2$	$s_1$	$s_2$	
0	$s_1$	1	-4	2	1	0	$1 = 0.5 \leftarrow 2$
0	$s_2$	3	5	-4	0	1	-
$Z_j$	0	0	0	0	0	$Z_j$	
$Z_j - C_j$	0	8	-2t	0	0	$Z_j - C_j$	

Since  $Z_j - C_j < 0$ , the current basic feasible solution is not optimal.

Since  $Z_j - C_j = -2$  is most negative, the corresponding non-basic variable  $x_2$  enters into the basis and the leaving variable is the basic variable  $s_1$  which corresponds to the minimum ratio  $\theta = 0.5$ . Here the pivot element is 2

**Step (5): First Iteration**

New Pivot equation = Old pivot equation  $\div$  Pivot element

$$= (1 \quad -4 \quad 2 \quad 1 \quad 0) \div (2) = (1/2 \quad -2 \quad 11/2 \quad 0)$$

New  $s_2$  equation = (Old  $s_2$  equation) - {(Corresponding column coefficient)  $\times$  (New Pivot equation)}

$$= (3 \quad 5 \quad -4 \quad 0 \quad 1) - \{(-4) \times (1/2 \quad -2 \quad 11/2 \quad 0)\}$$

$$= (5 \quad -3 \quad 2 \quad 1)$$

			-8	2	0	0
$C_B$	$Y_B$	$X_B$	$x_1$	$x_2$	$s_1$	$s_2$
2	$x_2$	1	-2	1	1	0
		----- 2			----- 2	
0	$s_2$	5	-3	0	2	1
$Z_j$		1	-4	2	1	0
$Z_j - C_j$		1	4	0	1	0

Since all  $Z_j - C_j \geq 0$ , then the current basic feasible solution is optimal.

$\therefore$  The optimal solution is

$$2x_1 + x_2 + s_1 = 50$$

$$2x_1 + 5x_2 + s_2 = 100$$

$$2x_1 + 3x_2 + s_3 = 90 \text{ and } x_1, x_2, s_1, s_2, s_3 \geq 0$$

**Step (2):** Put  $x_1 = 0$  and  $x_2 = 0$  in equation 1, 2 and 3,

we get the initial basic feasible solution is  $s_1 = 50$ ,  $s_2 = 100$  and  $s_3 = 90$

**Step (3): Initial Iteration**

The initial simplex table is given by

$C_j$			4	10	0	0	0	Ratio $\theta X_{Bi} = \text{Min} \{ a_{ir} / a_{ir} > 0 \}$
$C_B$	$Y_B$	$X_B$	$x_1$	$x_2$	$s_1$	$s_2$	$s_3$	
0	$s_1$	50	2	1	1	0	0	$50 = 50$ 1
0	$s_1$	50	2	1	1	0	0	$50 = 50$ 1
0	$s_2$	100	2	5	0	1	0	$100 = 20 \leftarrow 5$
0	$s_3$	90	2	3	0	0	1	$90 = 30$ 3
$Z_j$		0	0	0	0	0	0	
$Z_j - C_j$		0	-4	-10	0	0	$Z_j - C_j$	

Since  $Z_j - C_j < 0$ , the current basic feasible solution is not optimal.

Since  $Z_j - C_j = -10$  is most negative, the corresponding non-basic variable  $x_2$  enters into the basis and the leaving variable is the basic variable  $s_2$  which corresponds to the minimum ratio  $\theta = 20$ . Here the pivot element is 5

**Step (5): First Iteration**

New Pivot equation = Old pivot equation  $\div$  Pivot element

$$= (100 \ 2 \ 5 \ 0 \ 1 \ 0) \div (5) = (20 \ 2/5 \ 1 \ 0 \ 1/5 \ 0)$$

New  $s_1$  equation = (Old  $s_1$  equation) - {(Corresponding column coefficient)  $\times$  (New Pivot equation)}

$$= ( 50 \ 2 \ 1 \ 1 \ 0 \ 0 ) - \{ 1 \} \times ( 20 \ 2/5 \ 1 \ 0 \ 1/5 \ 0 )$$

$$= ( 308/5 \ 0 \ 1-1/50 )$$

New  $s_3$  equation = (Old  $s_3$  equation) – {(Corresponding column coefficient)× (New Pivot equation) }

$$= ( 90 \ 2 \ 3 \ 0 \ 0 \ 1 ) - \{ 3 \} \times ( 20 \ 2/5 \ 1 \ 0 \ 1/5 \ 0 )$$

$$= ( 304/5 \ 0 \ 0-3/5 \ 1 )$$

$C_j$			4	10	0	0	0
$C_B$	$Y_B$	$X_B$	$x_1$	$x_2$	$s_1$	$s_2$	$s_3$
0	$s_1$	30	8 ----- 5	0	1	-1 ----- 5	0
10	$x_2$	20	2 ----- 5	1	0	1 ----- 5	0
0	$s_3$	30	4 ----- 5	0	0	-3 ----- 5	1
$Z_j$		200	4	10	0	2	0
$Z_j - C_j$		200	0	0	0	2	0

Since all  $Z_j - C_j \geq 0$ , then the current basic feasible solution is optimal.

∴ The optimal solution is Maximize  $Z = 200$ ,  $x_1 = 0$  and  $x_2 = 20$ .

---

### Let us Sum up

---

In this unit, the students have learned to solve a Linear Programming Problem using the simplex method.

---

### Check your progress

---

- Simplex method was designed by \_\_\_\_\_
  - Dantzig
  - A.Charnes
  - Lemke
  - Hungarian
- Graphical method of linear programming is useful when the number of decision variable are \_\_\_\_\_
  - 2

- b. 2
  - c. finite
  - d. infinite
3. While solving a linear programming problem infeasibility may be removed by \_\_\_\_\_
- a. adding another constraint
  - b. adding another variable
  - c. removing a constraint
  - d. removing a variable

---

### **Glossary**

---

- Basic Variable:** Variable of a basic feasible solution has  $n$  non-negative value.
- Non-Basic Variable:** Variable of a feasible solution has a value equal to zero.
- Artificial Variable:** A non-negative variable introduced to provide basic feasible solution and initiate the simplex procedures.
- Slack Variable:** A variable corresponding to a  $\leq$  type constraint is a non-negative variable introduced to convert the inequalities into equations.
- Surplus Variable:** A variable corresponding to a  $\geq$  type constraint is a non-negative variable introduced to convert the constraint into equations.

---

### **Answers to check your progress**

---

- 1.a
- 2.a
- 3.c

---

### **Suggested Readings**

---

1. Frederick Hillier, Gerald J. Lieberman, Bodhibroto Nag, Preetam Basu, "Introduction to Operation Research", McGraw Hill, 11th edition, ISSN: 9354601200, 2021.
2. Sankar P. Iyer, Operations Research, Tata McGraw-Hill Education, 2008.

---

## **Block-2: Introduction**

---

**Block 2 - Transportation and Assignment** has been divided in to four Units.

**Unit-5: Transportation Problems** deals with Introduction of Transportation problems, Types of Transportation Problem, Mathematical Formulation of a Transportation Problem and Methods for finding Initial Solution.

**Unit-6: Initial Solution: North West Corner Rule and Least Cost Method** explains about the concept of North West Corner Method, Solved Problem, Least Cost Method and Solved Problem.

**Unit-7: Initial Solution: Vogel's Approximation Method** describes about Vogel's Approximation Method (VAM) and Solved Problem

**Unit-8 : Balanced and Unbalanced Assignment Problems** describes about Balanced Assignment Problem, Hungarian Method, Solved Problem, Unbalanced Assignment Problem and Solved Problem.

In all the units of Block -2 **Transportation and Assignment**, the Check your progress, Glossary, Answers to check your progress and Suggested Reading has been provided and the Learners are expected to attempt all the Check your progress as part of study.

### STRUCTURE

Overview

Objectives

5.1. Introduction

5.2. Types of Transportation Problem

5.3. Mathematical Formulation of a Transportation Problem

5.4. Methods for finding Initial Solution

Let Us Sum Up

Check Your Progress

Glossary

Answers to Check Your Progress

Suggested Readings

---

### Overview

---

In this unit we are going to learn the introduction to transportation problem

---

### Objectives

---

After studying this unit, the students will be able to understand the meaning,

- types and methods of transportation problem.
- 

### 5.1. Introduction

---

Transportation problem is a special kind of Linear Programming Problem (LPP) in which goods are transported from a set of sources to a set of destinations subject to the supply and demand of the sources and destination respectively such that the total cost of transportation is minimized.

---

### 5.2. Types of transportation problem

---

**Balanced:** When both supplies and demands are equal then the problem is said to be a balanced transportation problem.

**Unbalanced:** When the supply and demand are not equal then it is said to be an unbalanced transportation problem. In this type of problem, either a dummy row or a dummy column is added according to the

requirement to make it a balanced problem. Then it can be solved similar to the balanced problem.

### 5.3. Mathematical Formulation of a Transportation Problem

		Destination				Supply( $s_i$ )
		D1	D2	D3	D4	
Source	O1	$C_{11}$	$C_{12}$	$C_{13}$	$C_{14}$	S1
	O2	$C_{21}$	$C_{22}$	$C_{23}$	$C_{24}$	S2
	O3	$C_{31}$	$C_{32}$	$C_{33}$	$C_{34}$	S3
	O4	$C_{41}$	$C_{42}$	$C_{43}$	$C_{44}$	S4

Demand ( $d_j$ ):  $d_1$        $d_2$        $d_3$        $d_4$

In the above table **D1, D2, D3** and **D4** are the destinations where the products/goods are to be delivered from different sources **S1, S2, S3** and **S4**.  $S_i$  is the supply from the source  $O_i$ .  $d_j$  is the demand of the destination  $D_j$ .  $C_{ij}$  is the cost when the product is delivered from source  $S_i$  to destination  $D_j$ .

Assume that there are  $m$  sources and  $n$  destinations.

Let  $a_i$  be the supply (capacity) at source  $i$ ,  $b_j$  be the demand at destination  $j$ ,  $c_{ij}$  be the unit transportation cost from source  $i$  to destination  $j$  and  $x_{ij}$  be the number of units shifted from source  $i$  to destination  $j$ .

Then the transportation problem can be expressed mathematically as  
 Minimize  $Z = \sum_{i=1}^m \sum_{j=1}^n c_{ij} x_{ij}$

Then the transportation problem can be expressed mathematically as

$$\text{Minimize } Z = \sum_{i=1}^m \sum_{j=1}^n c_{ij} x_{ij}$$

Subject to the constraints

$$\sum_{j=1}^n x_{ij} = a_i, \quad i=1,2,3,\dots,m.$$

$$\sum_{i=1}^m x_{ij} = b_j, \quad j=1,2,3,\dots,n.$$

And  $x_{ij} \geq 0$ , for all  $i$  and  $j$ .

Note that the two sets of constraints will be consistent if  $\sum_{i=1}^m a_i = \sum_{j=1}^n b_j$

necessary and sufficient condition for a transportation problem to have a feasible solution. Problems satisfying this condition are called balanced transportation problems.



$$\sum_{i=1}^m a_i \neq \sum_{j=1}^n a_j$$

If then the transportation problem is said to be unbalanced.

---

#### 5.4. Methods for finding Initial Solution

---

The initial solution is a significant step to achieve the minimal total cost (optimal solution) of the transportation problem. This involves Initial solution to the given balanced Transportation Problems. There are several methods available to obtain an initial basic feasible solution of a transportation problem. For finding the initial basic feasible solution total supply must be equal to total demand. The following methods are used to find the initial solutions.

1. North West Corner Method.
2. Least Cost Method.
3. Vogel's Approximation Method (VAM).

---

#### Let us Sum Up

---

In this unit, the students have learned to understand the meaning, types and methods of transportation problem.

---

#### Check your Progress

---

1. An artificial variable leaves the basis means, there is no chance for the \_\_\_\_\_ variable to enter once again.
  - a. slack
  - b. surplus
  - c. artificial
  - d. dual
2. Service mechanism in a queuing system is characterized by \_\_\_\_\_.
  - a. customers behavior
  - b. servers behavior
  - c. customers in the system
  - d. server in the system
3. The objective of network analysis is to \_\_\_\_\_.
  - a. minimize total project duration
  - b. minimize total project cost

- c. minimize production delays, interruption, and conflicts
- d. maximize total project duration

---

## **Glossary**

---

**Transportation problems:** This is a type of LPP which is focused at transporting the goods and services at a minimum cost of time.

### **Balanced transportation**

**problems:** Here total supply equals to total demand.

### **Unbalanced transportation**

**problems:** Here total supply does not equal to total demand. It may be less or greater.

---

## **Answers to check your progress**

---

1.c

2.b

3.c

---

## **Suggested Readings**

---

1. Frederick Hillier, Gerald J. Lieberman, Bodhibroto Nag, Preetam Basu, "Introduction to Operation Research", McGraw Hill, 11th edition, ISSN: 9354601200, 2021.
2. Sankar P. Iyer, Operations Research, Tata McGraw-Hill Education, 2008

## Unit-6

---

# Initial Solution: North West Corner Rule and Least Cost Method

### STRUCTURE

Overview

Objectives

6.1. North West Corner Method

6.2. Solved Problem

6.3. Least Cost Method

6.4. Solved Problem

Let Us Sum Up

Check Your Progress

Glossary

Answers to Check Your Progress

Suggested Readings

---

### Overview

---

This chapter deals with the north west corner method which is the easiest method of Transportation Problem. The second method least cost method are also been dealt in this unit. Method and steps to solve the problems has been given in this section.

---

### Objectives

---

After studying this unit, the students will be able to

- solve the initial solutions using North West Corner Rule and Least Cost Method.
- 

### 6.1. North West Corner Method

---

The method starts at the North West (upper left) corner cell of the table.

**Step-1:** Allocate as much as possible to the selected cell, and adjust the associated amounts of capacity (supply) and requirement (demand) by subtracting the allocated amount.

**Step-2:** Cross out the row (column) with zero supply or demand to indicate that no further assignments can be made in that row (column). If both the row and column become zero simultaneously, cross out one of them only, and leave a zero supply or demand in the uncrossed-out row (column).

**Step -3:** If exactly one row (column) is left uncrossed out, then stop. Otherwise, move to the cell to the right if a column has just been crossed or the one below if a row has been crossed out. Go to step-1.Solved Problem

---

## 6.2. Solved Problem

---

Find the minimum cost of shipping after obtaining the initial solution for the following transportation problem using the North West Corner Rule. A company has manufacturing plants (A, B and C) with daily production of 7, 12 and 11 units and the warehouses (W1, W2 and W3) with a daily demand of 10, 10 and 10 units respectively. The transport cost in rupees per unit from each manufacturing location to each market are given below.

Plant	Warehouse			
	W1	W2	W3	
A	1	2	6	7
B	0	4	2	12
C	3	1	5	11
	10	10	10	

**Step 1: Check for Balanced Transportation Problem (BTP)**

$$\sum_{i=1}^m a_i = \sum_{j=1}^n b_j$$

$$7+12+11 = 10+10+10$$

$$30 = 30$$

**Step 2: Solve the BTP by North West Corner Rule**

1	2	6	7
0	4	2	12
3	1	5	11
10	10	10	

**North West Corner**

<b>1</b>	7	2	6	<del>7</del> 0
0		4	2	12
3		1	5	11
<del>10</del> 3		10	10	

<b>0</b>	3	4	2	<del>12</del> 9
3		1	5	11
<del>3</del> 0		10	10	

<b>4</b>	9	2	<del>9</del> 0
1		5	11
<del>10</del> 1		10	

<b>1</b>	1	5	10	<del>11</del> 0
<del>1</del> 0		<del>10</del> 0		

<b>1</b>	7	2	6
<b>0</b>	3	4	2
<b>3</b>		1	5
		<b>1</b>	<b>10</b>

**Step 3: Check for Non-degeneracy:  $N = m + n - 1$** 

$$5 = 3 + 3 - 1$$

$$5 = 5$$

**Step 4:****Calculate****the Total****Cost (TC)**

$$TC = 1 \times 7$$

$$+ 0 \times 3 + 4$$

$$\times 9 + 1 \times 1$$

$$+ 5 \times 10$$

$$= 94$$

---

**6.3. Least Cost Method**

---

The least cost method is also known as matrix minimum method in the sense we look for the row and the column corresponding to which  $C_{ij}$  is minimum. This method finds a better initial basic feasible solution by concentrating on the cheapest routes. Instead of starting the allocation with the North West cell as in the North West Corner Method, we start by allocating as much as possible to the cell with the smallest unit cost. If there are two or more minimum costs then we should select the row and the column corresponding to the lower numbered row. If they appear in the same row we should select the lower numbered column. We then cross out the satisfied row or column, and adjust the amounts of capacity and requirement accordingly. If both a row and a column are satisfied simultaneously, only one is crossed out. Next, we look for the uncrossed-out cell with the smallest unit cost and repeat the process until we are left at the end with exactly one uncrossed-out row or column.

---

**6.4. Solved Problem**

---

Find the minimum cost of shipping after obtaining the initial solution for the following transportation problem using the Least Cost method. A company has manufacturing plants (A, B and C) with daily production of 7, 12 and 11 units and the warehouses (W1, W2 and W3) with a daily demand of 10, 10 and 10 units respectively.

The transport cost in rupees per unit from each manufacturing location to each market are given below.

Plant	Warehouse			
	W1	W2	W3	
A	1	2	6	7
B	0	4	2	12
C	3	1	5	11
	10	10	10	

**Step 1: Check for Balanced Transportation Problem (BTP)**

1	7	2	6	7
0		4	2	12
3		1	5	11
	<del>3</del>	10	10	

$$7+12+11 = 10+10+10$$

$$30 = 30$$

**Step 2: Solve the BTP by Least Cost Method**

1	2	6	7
0	4	2	12
3	1	5	11
10	10	10	

1	2	6	7
0	4	2	2
3	1	5	11
0	10	10	

2	6	7
4	2	2
1	5	1
0	10	

Least Cost

6	7	0
2	2	0
5	1	0
		0

1	2	6	7	7	
0	10	4	2	2	12
3	1	10	5	1	11
		10	10	10	

**Step 3: Check for Non-degeneracy:  $N = m + n - 1$**

$$5 = 3 + 3 - 1$$

$$5 = 5$$

**Step 4: Calculate the Total Cost (TC)**

$$TC = 6 \times 7 + 0 \times 10 + 2 \times 2 + 1 \times 10 + 5 \times 1 = 61$$

---

### Let us Sum Up

---

In this unit, the students have learned to solve the initial solutions using North West Corner Rule and Least Cost Method.

---

### Check Your Progress

---

(1).The transportation model is a special class of linear programming models.

True / False

(2).A transportation problem requires exactly as many origins as destinations.

True / False

(3).Neither the north west-corner rule nor the intuitive method considers shipping cost in making initial allocations.

True / False



---

## **Glossary**

---

**Feasible Solution:** A feasible solution is said to be basic if the number of positive allocations equals  $m+n-1$ ; that is one less than the number of rows and columns in a transportation problem.

**Basic feasible solution:** If the number of affirmative allocations equals  $m+n-1$ , the solution is considered to be Basic feasible solution

---

## **Answers to check your progress**

---

1. True
  2. False
  3. False
- 

## **Suggested Readings**

---

1. Frederick Hillier, Gerald J. Lieberman, Bodhibroto Nag, Preetam Basu, "Introduction to Operation Research", McGraw Hill, 11th edition, ISSN: 9354601200, 2021.
2. Sankar P. Iyer, Operations Research, Tata McGraw-Hill Education, 2008

## Unit-7

---

# Initial Solution: Vogel's Approximation Method

### STRUCTURE

Overview

Objectives

7.1. Vogel's Approximation Method (VAM)

7.2. Solved Problem

Let us Sum up

Check your Progress

Glossary

Answers to check your progress

Suggested Readings

---

### Overview:

In this unit we are going to deal with most important type of transportation problem which gives most opt solution for any problem.

---

### Objectives

After studying this unit, the students will be able to

- solve the initial solutions using Vogel's Approximation Method (VAM).

---

### 7.1. Vogel's Approximation Method (VAM)

Vogel's Approximation Method (VAM) is an improved version of the least cost method that generally produces better solutions. The steps involved in this method are:

**Step-1:** For each row (column) with strictly positive capacity (requirement), determine a **penalty** by subtracting the **smallest** unit cost element in the row (column) from the next **smallest** unit cost element in the same row (column).

**Step-2:** Identify the row or column with the **largest penalty** among all the rows and columns. If the penalties corresponding to two or more rows or columns are equal, we select the topmost row and the extreme left column.

**Step-3:** We select  $X_{ij}$  as a basic variable if  $C_{ij}$  is the **minimum cost** in the row or column with **largest penalty**. We choose the numerical

value of  $X_{ij}$  as high as possible subject to the row and the column constraints. Depending upon whether  $a_i$  or  $b_j$  is the smaller of the two  $i^{\text{th}}$  row or  $j^{\text{th}}$  column is crossed out.

**Step 4:** The Step 2 is now performed on the uncrossed-out rows and columns until all the basic variables have been satisfied

## 7.2. Solved Problem

Find the minimum cost of shipping after obtaining the initial solution for the following transportation problem using the Vogel's Approximation Method (VAM). A company has manufacturing plants (A, B and C) with daily production of 7, 12 and 11 units and the warehouses (W1, W2 and W3) with a daily demand of 10, 10 and 10 units respectively. The transport cost in rupees per unit from each manufacturing location to each market are given below.

Plant	Warehouse			
	W1	W2	W3	
A	1	2	6	7
B	0	4	2	12
C	3	1	5	11
	10	10	10	

**Step 1: Check for Balanced Transportation Problem (BTP)**

1	7	2	6	<del>0</del>
0		4	2	12
3		1	5	11
<del>10</del> 3	10	10		

$$7+12+11 = 10+10+10$$

$$30 = 30$$

**Step 2: Solve the BTP by Vogel's Approximation Method**

1	2	6	7
0	4	2	12
3	1	5	11
10	10	10	

1	2	7	Penalty
<span style="border: 1px solid red;">0</span>	2	<del>2</del> 0	$4 - 0 = 4$ Highest
3	1	11	$3 - 1 = 2$

~~10~~  
8

$1 - 0 = 1$        $2 - 1 = 1$

1	2	6	7	Penalty
0	4	<span style="border: 1px solid red;">2</span>	<del>12</del> 2	$2 - 0 = 2$
3	1	5	11	$3 - 1 = 2$

10      10      ~~10~~  
0

$1 - 0 = 1$        $2 - 1 = 1$        $5 - 2 = 3$   
Highest

1	7	<del>7</del>	0
3	1	<del>1</del>	0
	<del>8</del>		0

1	7	2	6	7
0	2	4	2	10
3	1	1	10	5

	10	10	10	
1		2	7	Penalty
				2 - 1 = 1
3		1	<del>1</del>	1
		10		3 - 1 = 2
				Highest
8		<del>10</del>		
		0		
3 - 1 = 2		2 - 1 = 1		
Highest				

Step 3: Check for

**Non-degeneracy:  $N = m + n - 1$**

$$5 = 3 + 3 - 1$$

$$5 = 5$$

**Step 4: Calculate the Total Cost (TC)**

$$TC = 1 \times 7 + 0 \times 2 + 3 \times 1 + 1 \times 10 + 2 \times 10$$

$$= 40$$

---

### Let us Sum Up

---

In this unit, the students have learned to solve the initial solutions using Vogel's Approximation Method (VAM).

---

## Check your Progress

---

(1).A feasible solution in transportation models is one in which all of the supply and demand constraints are satisfied.

True / False

(2).A transportation problem with a total supply of 500 and a total demand of 400 will have an optimal solution that leaves 100 units of supply unused.

True / False

(3).Which of the following is NOT needed in order to use the transportation model?.

- a. the source points and their capacity.
- b. the fixed costs of source points.
- c. the cost of shipping one unit from each source to each destination.
- d. the destination points and their demand.
- e. All of these are needed.

---

## Glossary

---

**Degeneracy:** Degeneracy occurs when the number of occupied squares or routes in a transportation table solution is less than the number of rows plus the number of columns minus/

**Dummy source:** A dummy source or destination is added to balance transportation problem where demand is not equal to supply.

---

## Answers to check your progress

---

1. True      2. True      3. b

---

## Suggested Readings

---

1. Frederick Hillier, Gerald J. Lieberman, Bodhibroto Nag, Preetam Basu, "Introduction to Operation Research", McGraw Hill, 11th edition, ISSN: 9354601200, 2021.
2. Sankar P. Iyer, Operations Research, Tata McGraw-Hill Education, 2008
3. Gupta. P. K, Man Mohan, Kanti Swarup: "Operations Research", Sultan Chand, 2008.

## Unit-8

---

# Balanced and Unbalanced Assignment Problems

### STRUCTURE

Overview

Objectives

8.1. Balanced Assignment Problem

8.2. Hungarian Method

8.3. Solved Problem

8.4. Unbalanced Assignment Problem

8.5. Solved Problem

Let us Sum Up

Check your progress

Glossary

Answers to check your progress

Suggestions

---

### Overview

In this unit we are going to deal with balanced and unbalanced assignment problem where assignments of job is done to machine or person according to the need. Optimum cost is obtained after allocating.

---

### Objectives

After studying this unit, the students will be able to

- solve the Assignment Problems using Hungarian Method.

---

### 8.1. The Balanced Assignment Problem

Given  $n$  facilities,  $n$  jobs and the effectiveness of each facility to each job, here the problem is to assign each facility to one and only one job so that the measure of effectiveness is optimized. Here the optimization means Maximized or Minimized. There are many management problems has an assignment problem structure. For example, the head of the department may have 6 people available for assignment and 6 jobs to fill. Here the head may like to know which job should be assigned to which person so that all tasks can be accomplished in the shortest time possible. Another example a container company may have an empty container in each of the location 1, 2,3,4,5 and requires an empty

container in each of the locations 6,7,8,9,10. It would like to ascertain the assignments of containers to various locations so as to minimize the total distance. The third example here is, a marketing set up by making an estimate of sales performance for different salesmen as well as for different cities one could assign a particular sales man to a particular city with a view to maximize the overall sales.

Note that with  $n$  facilities and  $n$  jobs there are  $n!$  possible assignments. The simplest way of finding an optimum assignment is to write all the  $n!$  possible arrangements, evaluate their total cost and select the assignment with minimum cost. But this method leads to a calculation problem of formidable size even when the value of  $n$  is moderate. For  $n=10$  the possible number of arrangements is 3268800.

If in an assignment problem some cost elements  $c_{ij}$  are negative, we may have to convert them into an equivalent assignment problem where all the cost elements are non-negative by adding a suitable large constant to the cost elements of the relevant row or column, and then we look for a feasible solution which has zero assignment cost after adding suitable constants to the cost elements of the various rows and columns. Since it has been assumed that all the cost elements are non-negative, this assignment must be optimum. On the basis of this principle a computational technique known as Hungarian Method is developed. The Hungarian Method is discussed as follows.

---

## 8.2. Hungarian Method

---

First check whether the number of rows is equal to the numbers of columns, if it is so, the assignment problem is said to be balanced.

**Step :1** Choose the least element in each row and subtract it from all the elements of that row.

**Step :2** Choose the least element in each column and subtract it from all the elements of that column. Step 2 has to be performed from the table obtained in step 1.

**Step:3** Now determine an assignment as follows:

- For each row or column with a single zero element cells that has not be assigned or eliminated, box that zero element as an assigned cell.
- For every zero that becomes assigned, cross out all other zeros in the same row and for column.



- If for a row and for a column there are two or more zero and one can't be chosen by inspection, choose the assigned zero cell arbitrarily.
- The above procedures may be repeated until every zero-element cell is either reassigned (boxed) or crossed out.

**Step 4:** If each row and each column contain exactly one assignment, then the solution is optimal.

**Step 5:** An optimum assignment is found, if the number of assigned cells is equal to the number of rows (and columns). In case we had chosen a zero cell arbitrarily, there may be an alternate optimum. If no optimum solution is found i.e. some rows or columns without an assignment then go to **Step 6**.

**Step 6:** Draw a set of lines equal to the number of assignments which has been made in **Step 4**, covering all the zeros in the following manner.

- Mark check ( $\checkmark$ ) to those rows where no assignment has been made.
- Examine the checked ( $\checkmark$ ) rows. If any zero-element cell occurs in those rows, check ( $\checkmark$ ) the respective columns that contains those zeros.
- Examine the checked ( $\checkmark$ ) columns. If any assigned zero element occurs in those columns, check ( $\checkmark$ ) the respective rows that contain those assigned zeros.
- The process may be repeated until now more rows or column can be checked.
- Draw lines through all unchecked rows and through all checked columns

**Step 7:** Examine those elements that are not covered by a line. Choose the smallest of these elements and subtract this smallest from all the elements that do not have a line through them. Add this smallest element to every element that lies at the intersection of two lines. Then the resulting matrix is a new revised cost table.

---

### 8.3. Solved Problem

---

Solve the following assignment problem. Cell values represent cost of assigning job A, B, C and D to the machines I, II, III and IV.

		machines			
		I	II	III	IV
jobs	A	10	12	19	11
	B	5	10	7	8
	C	12	14	13	11
	D	8	15	11	9

**Solution:**

Here the number of rows and columns are equal.

∴ The given assignment problem is balanced. Now let us find the solution.

**Step 1:** Select a smallest element in each row and subtract this from all the elements in its row.

		I	II	III	IV
A	0	2	9	1	
B	0	5	2	3	
C	1	3	2	0	
D	0	7	3	1	

Look for at least one zero in each row and each column. Otherwise go to step 2.

**Step 2:** Select the smallest element in each column and subtract this from all the elements in its column.

		I	II	III	IV
A	0	0	7	1	
B	0	3	0	3	
C	1	1	0	0	
D	0	5	1	1	

Since each row and column contains at least one zero, assignments can be made.

**Step 3 (Assignment):**

Examine the rows with exactly one zero. First three rows contain more than one zero. Go to row D. There is exactly one zero. Mark that zero by □ (i.e.) job D is assigned to machine I. Mark other zeros in its column by ×.

	I	II	III	IV
A	<del>0</del>	0	7	1
B	<del>0</del>	3	0	3
C	1	1	0	0
D	<input type="checkbox"/> 0	5	1	2

**Step 4:** Now examine the columns with exactly one zero. Already there is an assignment in column I. Go to the column II. There is exactly one zero. Mark that zero by . Mark other zeros in its row by  $\times$ .

	I	II	III	IV
A	<del>0</del>	<input type="checkbox"/> 0	7	1
B	<del>0</del>	3	0	3
C	1	1	0	0
D	<input type="checkbox"/> 0	5	1	2

Column III contains more than one zero. Therefore, proceed to Column IV, there is exactly one zero. Mark that zero by . Mark other zeros in its row by  $\times$ .

	I	II	III	IV
A	<del>0</del>	<input type="checkbox"/> 0	7	1
B	<del>0</del>	3	0	3
C	1	1	<del>0</del>	<input type="checkbox"/> 0
D	<input type="checkbox"/> 0	5	1	2

**Step 5:** Again, examine the rows. Row B contains exactly one zero. Mark that zero by .

	I	II	III	IV
A	<del>0</del>	<input type="checkbox"/> 0	7	1
B	<del>0</del>	3	<input type="checkbox"/> 0	3
C	1	1	<del>0</del>	<input type="checkbox"/> 0
D	<input type="checkbox"/> 0	5	1	2

Thus all the four assignments have been made. The optimal assignment schedule and total cost is

Job	Machine	cost
A	II	12
B	III	7
C	IV	11
D	I	8
Total cost		38

The optimal assignment (minimum) cost = ₹ 38

### Example 2

Consider the problem of assigning five jobs to five persons. The assignment costs are given as follows. Determine the optimum assignment schedule.

		Job				
		1	2	3	4	5
Person	A	8	4	2	6	1
	B	0	9	5	5	4
	C	3	8	9	2	6
	D	4	3	1	0	3
	E	9	5	8	9	5

### Solution:

Here the number of rows and columns are equal.

∴ The given assignment problem is balanced. Now let us find the solution.

**Step 1:** Select a smallest element in each row and subtract this from all the elements in its row.

The cost matrix of the given assignment problem is

		Job				
		1	2	3	4	5
Person	A	7	3	1	5	0
	B	0	9	5	5	4
	C	1	6	7	0	4
	D	4	3	1	0	3
	E	4	0	3	4	0

Column 3 contains no zero. Go to Step 2.

**Step 2:** Select the smallest element in each column and subtract this from all the elements in its column.

		Job				
		1	2	3	4	5
Person	A	7	3	0	5	0
	B	0	9	4	5	4
	C	1	6	6	0	4
	D	4	3	0	0	3
	E	4	0	2	4	0

Since each row and column contains at least one zero, assignments can be made.

**Step 3 (Assignment):**

Examine the rows with exactly one zero. Row B contains exactly one zero. Mark that zero by . Person B is assigned to Job 1. Mark other zeros in its column by  $\times$ .

		Job				
		1	2	3	4	5
Person	A	7	3	0	5	0
	B	<input type="checkbox"/> 0	9	4	5	4
	C	1	6	6	0	4
	D	4	3	0	0	3
	E	4	0	2	4	0

Now, Row C contains exactly one zero. Mark that zero by . Mark other zeros in its column by ✕.

		Job				
		1	2	3	4	5
Person	A	7	3	0	5	0
	B	<input type="checkbox"/> 0	9	4	5	4
	C	1	6	6	<input type="checkbox"/> 0	4
	D	4	3	0	<del>0</del>	3
	E	4	0	2	4	0

Now, Row D contains exactly one zero. Mark that zero by . Mark other zeros in its column by ✕.

		Job				
		1	2	3	4	5
Person	A	7	3	<del>0</del>	5	0
	B	<input type="checkbox"/> 0	9	4	5	4
	C	1	6	6	<input type="checkbox"/> 0	4
	D	4	3	<input type="checkbox"/> 0	<del>0</del>	3
	E	4	0	2	4	0

Row E contains more than one zero, now proceed column wise. In column 1, there is an assignment. Go to column 2. There is exactly one zero. Mark that zero by . Mark other zeros in its row by ✕.

		Job				
		1	2	3	4	5
Person	A	7	3	<del>0</del>	5	0
	B	<input type="checkbox"/> 0	9	4	5	4
	C	1	6	6	<input type="checkbox"/> 0	4
	D	4	3	<input type="checkbox"/> 0	<del>0</del>	3
	E	4	<input type="checkbox"/> 0	2	4	<del>0</del>

There is an assignment in Column 3 and column 4. Go to Column 5. There is exactly one zero. Mark that zero by  $\square$ . Mark other zeros in its row by  $\times$ .

		Job				
		1	2	3	4	5
Person	A	7	3	<del>0</del>	5	$\square$ 0
	B	$\square$ 0	9	4	5	4
	C	1	6	6	$\square$ 0	4
	D	4	3	$\square$ 0	<del>0</del>	3
	E	4	$\square$ 0	2	4	<del>0</del>

Thus all the five assignments have been made. The Optimal assignment schedule and total cost is

Person	Job	cost
A	5	1
B	1	0
C	4	2
D	3	1
E	2	5
Total cost		9

The optimal assignment (minimum) cost = 9

#### 8.4. Unbalanced Assignment Problem

Suppose if the number of persons is different from the number of jobs, then the assignment problem is called as **unbalanced**.

If the number of jobs is less than the number of persons, some of them can't be assigned any job. So that we have to introduce one or more dummy jobs of zero duration to make the unbalanced assignment problem into balanced assignment problem. This balanced assignment problem can be solved by using the Hungarian Method as discussed in the previous section. The persons to whom the dummy jobs are assigned left out of assignment.

Similarly, if the number of persons is less than number of jobs then we have introduced one or more dummy persons with zero duration to modify the unbalanced into balanced and then the problem is solved using the Hungarian Method. Here the jobs assigned to the dummy persons are left out.

---

## 8.5. Solved Problem

---

### Example 3

Solve the following assignment problem.

		Men		
		1	2	3
Task	P	9	26	15
	Q	13	27	6
	R	35	20	15
	S	18	30	20

### Solution:

Since the number of columns is less than the number of rows, given assignment problem is unbalanced one. To balance it, introduce a dummy column with all the entries zero. The revised assignment problem is here only 3 tasks can be assigned to 3 men.

		Men			
		1	2	3	d
Task	P	9	26	15	0
	Q	13	27	6	0
	R	35	20	15	0
	S	18	30	20	0

**Step 1:** is not necessary, since each row contains zero entry. Go to

**Step 2 :**

		Men			
		1	2	3	d
Task	P	0	6	9	0
	Q	4	7	0	0
	R	26	0	9	0
	S	9	10	14	0



**Step 3 (Assignment):**

Since each row and each column contains exactly one assignment, all the three men have been assigned a task. But task S is not assigned to any Man. The optimal assignment schedule and total cost is

Task	Men	cost
<i>P</i>	1	9
<i>Q</i>	3	6
<i>R</i>	2	20
<i>S</i>	<i>d</i>	0
Total cost		35

		Men			
		1	2	3	<i>d</i>
Task	<i>P</i>	<input type="checkbox"/> 0	6	9	<del>∞</del>
	<i>Q</i>	4	7	<input type="checkbox"/> 0	<del>∞</del>
	<i>R</i>	26	<input type="checkbox"/> 0	9	<del>∞</del>
	<i>S</i>	9	10	14	<input type="checkbox"/> 0

The optimal assignment (minimum) cost = ₹ 35

---

**Let us Sum Up**

In this unit, the students have learned to solve the Assignment Problems using Hungarian Method.

---

## Check your Progress

---

1. Which of the following is NOT information needed for a transportation problem?

- a. the list of sources and the capacity at each
- b. the set of destinations and the demand at each
- c. the set of origins and the demand at each origin
- d. the cost of shipping one unit from each origin to each destination
- e. None of the above is needed

2. The purpose of the transportation approach for location analysis is to minimize which of the following?

- a. the number of shipments
- b. total fixed costs
- c. total variable costs
- d. total costs
- e. total shipping costs

3. The transportation method is a special case of the family of problems known as what?

- a. linear programming problems
- b. statistical problems
- c. decision tree problems
- d. regression problems
- e. simulation problems

---

## Glossary

---

**Cost Table:** The completion time or cost corresponding to every assignment is written down in a table form if referred as a cost table.

**Hungarian Method:** A technique of solving assignment problems.

**Assignment Problem:** A special kind of linear programming problem where the objective is to minimize the assignment cost or time.

### Balanced Assignment

**Problem:** An assignment problem where the number of persons equal to the number of jobs.

### **Unbalanced Assignment**

**Problem:** An assignment problem where the number of jobs is not equal to the number of persons.

### **Infeasible Assignment**

**Problem:** An assignment problem where a particular person is unable to perform a particular job or certain job cannot be done by certain machines.

---

### **Answers to check your progress**

---

1.c

2. e

3.a

---

### **Suggested Readings**

---

1. Frederick Hillier, Gerald J. Lieberman, Bodhibroto Nag, Preetam Basu, "Introduction to Operation Research", McGraw Hill, 11th edition, ISSN: 9354601200, 2021.
2. Sankar P. Iyer, Operations Research, Tata McGraw-Hill Education, 2008
3. Gupta. P. K, Man Mohan, Kanti Swarup: "Operations Research", Sultan Chand, 2008.

---

### **Block-3: Introduction**

---

**Block-3: Network Models** has been divided in to four Units.

**Unit-9: Basic Terminologies** explains about the Basic Terminologies, Project Network and Solved Problem.

**Unit-10: Network Models** deals with Introduction, Network Models and Techniques of Network Models.

**Unit-11: Critical Path method (CPM)** describes about Critical Path Method (CPM) and Solved Problems.

**Unit-12: Program Evaluation Review Technique (PERT)** describes about the **Programme** Evaluation Review Technique (PERT) and Solved Problems

In all the units of Block -3 **Network Models**, the Check your progress, Glossary, Answers to Check your progress and Suggested Reading has been provided and the Learners are expected to attempt all the Check your progress as part of study.

### STRUCTURE

Overview

Objectives

9.1. Basic Terminologies

9.2. Project Network

9.3. Solved Problem

Let us Sum Up

Check your Progress

Glossary

Answers to check your progress

Suggestions

---

### Overview

---

In this unit we are going to deal with the networking models to know the accurate path for any problem. Optimal cost is being obtained based on the network.

---

### Objectives

---

After studying this unit, the students will be able to

- understand basic terminologies and Project Network of Network models.
- 

### 9.1. Basic Terminologies Activity

---

An activity means a work. A project consists of several activities. An activity takes time. It is represented by an arrow in a diagram of the network. For example, an activity in house construction can be flooring. This is represented as follows:

Flooring 

Construction of a house involves various activities. Flooring is an activity in this project. We can say that a project is completed only when all the activities in the project are completed.

### Event

It is the beginning or the end of an activity. Events are represented by circles in a project network diagram. The events in a network are called the **nodes**.

**Example:**



Starting a punching machine is an activity. Stopping the punching machine is another activity.

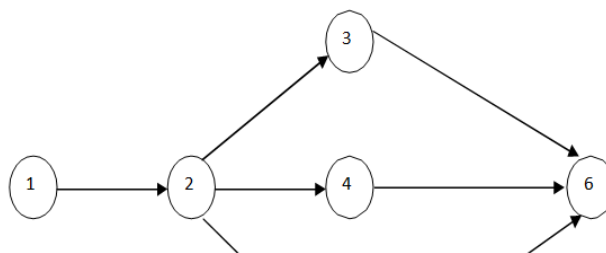
### **1. Predecessor Event**

The event just before another event is called the predecessor event.

### **2. Successor Event**

The event just following another event is called the successor event.

**Example:** Consider the following.



In this diagram, event 1 is predecessor for the event 2. Event 2 is successor to event 1.

Event 2 is predecessor for the events 3, 4 and 5. Event 4 is predecessor for the event 6.

Event 6 is successor to events 3, 4 and 5.

### **Dummy Activity**

A dummy activity is an activity which does not consume any time. Some times, it may be necessary to introduce a dummy activity in order to provide connectivity to a network or for the preservation of the logical sequence of the nodes and edges.

---

## 9.2. Project Network

---

A network consists of several destinations or jobs which are linked with one another. A manager will have occasions to deal with some network or other. Certain problems pertaining one works are taken up for consideration in this unit.

A network is a series of related activities and events which result in an end product or service. The activities shall follow a prescribed sequence. For example, while constructing a house, laying the foundation should take place before the construction of walls. Fitting water tapes will be done towards the completion of the construction. Such a sequence cannot be altered.

A project network consists of a finite number of events and activities, by adhering to a certain specified sequence. There shall be a **start event** and an **end event (or stop event)**. All the other events shall be between the start and the end events. The activities shall be marked by directed arrows. An activity takes the project from one event to another event.

An event takes place at a point of time where as an activity takes place from one point of time to another point of time.

---

## 9.3. Solved Problem

---

### Problem1:

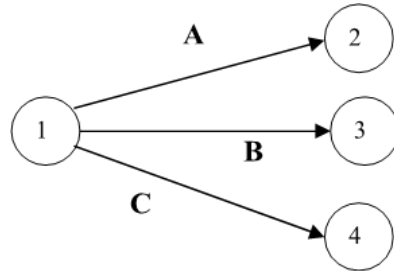
Construct the network diagram for a project with the following activities:

Activity	Name of	Immediate
Event	Activity	Predecessor Activity
1→2	A	-
1→3	B	-
1→4	C	-
2→5	D	A
3→6	E	B
4→6	F	C
5→6	G	D

**Solution:**

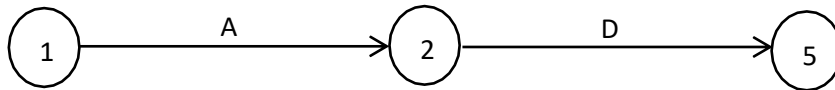
The start event is node 1.

The activities A,B,C start from node 1 and none of them has a predecessor activity. A joins nodes 1 and 2; B joins nodes 1 and 3; C joins nodes 1 and 4. So we get the following:

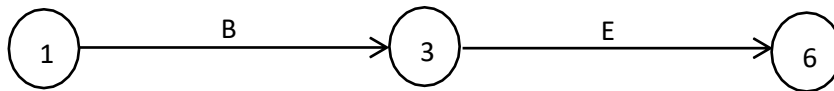


This is a part of the network diagram that is being constructed.

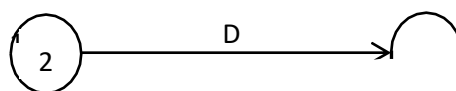
Next, activity D has A as the predecessor activity. D joins nodes 2 and 5. So we get



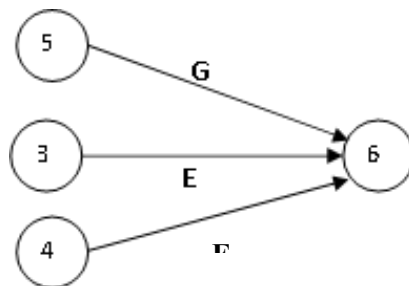
So we get



Next, activity G has D as the predecessor activity. G joins nodes 5 and 6. Thus we obtain



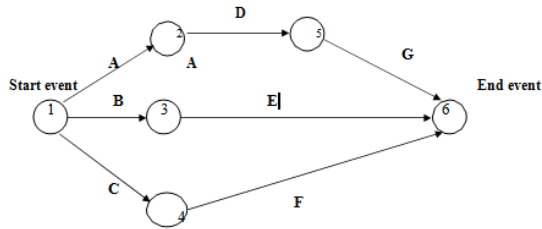
Since activities E,F,G terminate in node 6, we get





6 is the end event.

Combining all the pieces together, the following network diagram is obtained for the given project



We validate the diagram by checking with the given data.


**Problem2:**

Develop a network diagram for the project specified below:

Activity	Immediate Predecessor Activity
A	-
B	A
C,D	B
E	C
F	D
G	E,F

**Solution:**

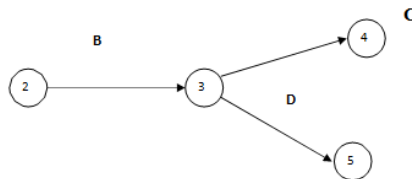
Activity A has no predecessor activity. i.e., It is the first activity. Let us suppose that activity A takes the project from event 1 to event 2. Then we have the following representation for A:



For activity B, the predecessor activity is A. Let us suppose that B joins nodes 2 and 3. Thus we get



Activities C and D have B as the predecessor activity. Therefore, we obtain the following:



Activity E has D as the predecessor activity. So we get



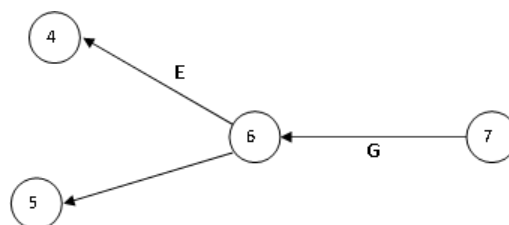
Activity F has D as the predecessor activity. So we get



Activity G has E and F as predecessor activities. This is possible only if nodes 6 and 6' are one and the same. So, rename node 6' as node 6. Then we get

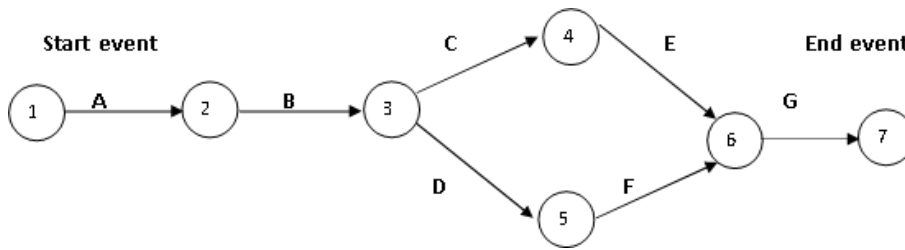


and



G is the last activity.

Putting all the pieces together, we obtain the following diagram the project network:

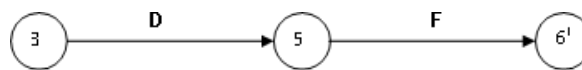


The diagram is validated by referring to the given data.

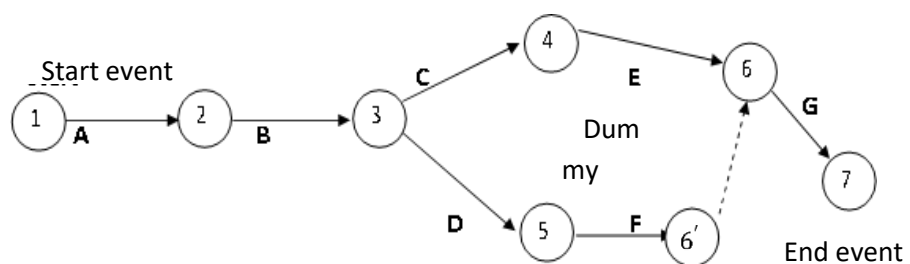
**Note:** An important point may be observed for the above diagram. Consider the following parts in the diagram



and



We took nodes 6 and 6' as one and the same. Instead, we can retain them as different nodes. Then, in order to provide connectivity to the network, we join nodes 6' and 6 by a dummy activity. Then we arrive at the following diagram for the project network:




---

### Let us Sum Up

---

In this unit, the students have learned to understand basic terminologies and Project Network of Network models.

---

## Check your Progress

---

1. In program evaluation review technique network each activity time assume a beta distribution because .....
  - a. it is a unimodal distribution that provides information regarding the uncertainty of time estimates of activities
  - b. it has got finite non-negative error
  - c. it need not be symmetrical about model value
  - d. the project is progressing well
2. If there is no non-negative replacement ratio in solving a linear programming problem then the solution is .....
  - a. feasible
  - b. bounded
  - c. unbounded
  - d. infinite
3. The objective of network analysis is to .....
  - a. minimize total project duration
  - b. minimize total project cost
  - c. minimize production delays, interruption and conflicts
  - d. maximize total project duration

---

## Glossary

---

- Predecessor Event:** The event just before another event is called the predecessor event.
- Successor Event:** The event just following another event is called the successor event.
- Project network:** A finite number of events and activities, by adhering to a certain specified sequence.

---

**Answers to check your progress**

---

1. a
2. c
3. a

---

**Suggested Readings**

---

1. Frederick Hillier, Gerald J. Lieberman, Bodhibroto Nag, Preetam Basu, "Introduction to Operation Research", McGraw Hill, 11th edition, ISSN: 9354601200, 2021.
2. Sankar P. Iyer, Operations Research, Tata McGraw-Hill Education, 2008
3. Gupta. P. K, Man Mohan, Kanti Swarup: "Operations Research", Sultan Chand, 2008.

# Unit-10

---

## Network Models

### STRUCTURE

Overview

Objectives

10.1. Introduction

10.2. Network Models

10.3. Techniques of Network Models

Let us Sum Up

Check your progress

Glossary

Answers to check your progress

Suggestions

---

### Overview

Networking is an important concept where by the shortest path is identified and the optimal solution is obtained. The methodology is explained below.

---

### Objectives

After studying this unit, the students will be able to understand

- Network Models and its techniques.

---

### 10.1. Introduction

Network models are possibly still the most important of the special structures in linear programming. The characteristics of network models were examined and formulated some examples of these models, and give one approach to their solution. The approach presented here is simply derived from specializing the rules of the simplex method to take advantage of the structure of network models. The resulting algorithms are extremely efficient and permit the solution of network models so large that they would be impossible to solve by ordinary linear-programming procedures. Their efficiency stems from the fact that a pivot operation for the simplex method can be carried out by simple addition and subtraction without the need for maintaining and updating the usual tableau at each iteration. Further, an added benefit of these

algorithms is that the optimal solutions generated turn out to be integer if the relevant constraint data are integer.

---

## 10.2. Network Models

---

A Network Model is one which can be represented by a set of nodes, a set of arcs, and functions (e.g. costs, supplies, demands, etc.) associated with the arcs and/or nodes. The network model is graphical in that it is presented as a collection of the nodes and arcs drawn in the figure. The nodes represent the cities of this problem, and we name them with the shortened names of the supply and demand cities. Arcs are the directed line segments of the figure.

### Terminology

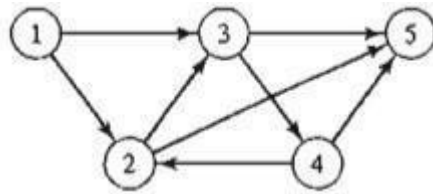
- Node (vertex)
- Arc (link, edge, or branch): Weight ( $W_{ij}$ )
- Graph – Network
- Directed network (all arcs are directed) vs. undirected network (all arcs are undirected).
- Directed path from node  $i$  to node  $j$  (flow from node  $i$  to node  $j$  along this path is feasible) vs. undirected path (flow can violate the direction of arcs)
- Cycle: A path that begins and ends at the same node.
- Tree is a connected network (for some subset of nodes) that contains no undirected cycles.
- Spanning tree—is a connected network for all  $n$  nodes that contains no undirected cycles.

Network Definitions. A network consists of a set of nodes linked by arcs (or branches). The notation for describing a network is  $(N, A)$ , where  $N$  is the set of nodes and  $A$  is the set of arcs. As an illustration, the network in Figure 6.1 is described as

$$N = \{1,2,3,4,5\}$$

$$A = \{(1,2), (1,3), (2,3), (2,5), (3,4), (3,5), (4,2), (4,5)\}$$

Associated with each network is a flow (e.g., oil products flow in a pipeline and automobile traffic flows in highways). In general, the flow in a network is limited by the capacity of its arcs, which may be finite or infinite.




---

### 10.3. Techniques of Network Models

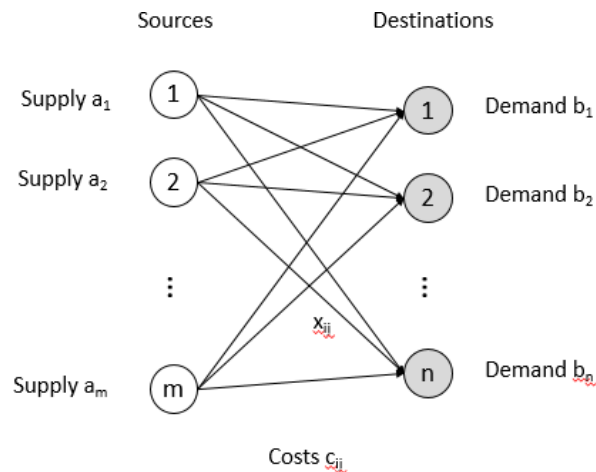
---

Techniques of Network Models or Algorithms

- Transportation
- Assignment
- Minimal Spanning Tree
- Shortest Path Algorithms
- Maximal Flow Problems or Algorithms
- Minimum Cost Flow
- Critical Path Method (CPM)

#### Transportation problem

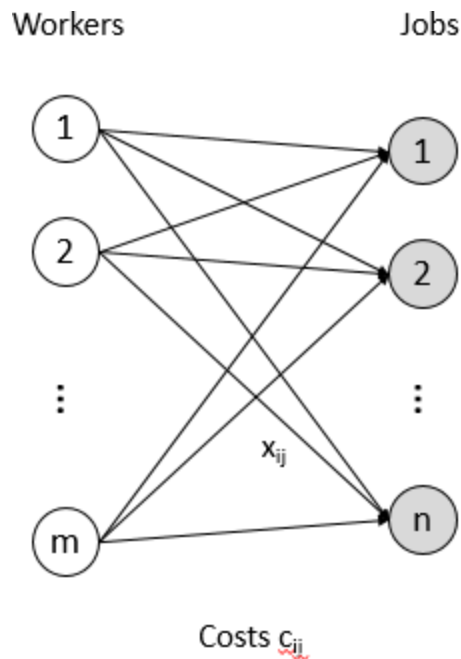
•Transportation problem is to minimize the total shipping costs of transporting goods from  $m$  origins or sources (each with a supply  $a_i$ ) to  $n$  destinations (each with a demand  $b_j$ ), when the unit shipping cost from source,  $i$ , to a destination,  $j$ , is  $c_{ij}$



#### Assignment Problem

- An Assignment Problem is to minimize the total cost assignment of  $m$  workers to  $n$  jobs, given that the cost of worker  $i$  performing job  $j$  is  $c_{ij}$ .





### Minimal Spanning Tree

- Problem Description: In a connected, undirected graph, a spanning tree, is a subgraph that connects all nodes on the network.
- Definition: A network model is designed by inserting enough arcs to satisfy the requirement that there be a path between every pair of nodes is called Minimal Spanning Tree
  - Weights on the arcs: Costs
  - The graph: undirected
  - Network Model
- Objective Function: Minimize cost for the total length of the arcs from the origin to the destination
- Constraint: Path through a network
- Decision Variable: Path through a network
- Algorithm: Kruskal's algorithm, Prim's Algorithm, Greedy methods.
- Application: How to install phone lines under the roads to establish telephone communication among all the stations in the smallest cost

### **Shortest Path Algorithms**

- Problem Description: Given a network with distance (or travel time, or cost, etc.) associated with each arc, so find a path is important through the network
- Definition: The problem of finding the shortest path from the origin to the destination in the network is called a shortest path problem.
- Objective: To find the shortest path from the origin to the destination
- Weights on the arcs: Distance or Costs or Time
- The graph: directed
- Network Model
- Objective Function: Minimize cost or time for the flow from the origin to the destination
- Constraint: Flow through a network
- Decision Variable: Flow through a network
- Algorithm: Dijkstra's algorithm, Floyd's Algorithm
- Application: Determine which route from the park entrance (O) to station T has the smallest total distance

### **Maximal Flow Problems or Algorithms**

- Problem Description: A network model has a capacity that limits the quantity of a product that may be transported through the arc. So the flow of material is important.
- Definition: The problem of transporting the maximum amount of flow from the origin to the destination in the network is called a maximum flow problems.
- Weights on the arcs: Capacities (Material, Product)
- The graph: directed
- Network Model
- Objective Function: Maximize the amount of material sent from the origin to the destination
- Constraint: Flow of material
- Decision Variable: The amount of material
- Algorithm: Max Flow – Min Cut, Augmenting Path Algorithm

- Application: How to route various trips to maximize the number of trips that can be made per day without violating the limits

---

### Let us Sum Up

---

In this unit, the students have learned to understand Network Models and its techniques.

---

### Check your Progress

---

1. Please state which statement is true.
  - (i) All linear programming problems may not have unique solutions
  - (ii) The artificial variable technique is not a device that does not get the starting basic feasible solution.
  - a) Both (i) and (ii)
  - b) (ii) only
  - c) (i) only
  - d) Both are incorrect
2. Please state which statement is incorrect.
  - (i) Linear programming was first formulated by an English economist L.V. Kantorovich
  - (ii) LP is generally used in solving maximization or minimization problems subject to certain assumptions.
  - a) (ii) only
  - b) (i) only
  - c) Both (i) and (ii)
  - d) Both are correct
3. ----- which is a subclass of a linear programming problem (LPP)
  - a) Programming problem
  - b) Transportation problem
  - c) Computer problem
  - d) Both are incorrect

---

### Glossary

---

**Network Model:** One which can be represented by a set of nodes, a set of arcs, and functions (e.g. costs, supplies, demands, etc.) associated with the arcs and/or nodes.

---

**Answers to check your progress**

---

1.C

2.B

3.C

---

**Suggested readings**

---

1. Frederick Hillier, Gerald J. Lieberman, Bodhibroto Nag, Preetam Basu, "Introduction to Operation Research", McGraw Hill, 11th edition, ISSN: 9354601200, 2021.
2. Sankar P. Iyer, Operations Research, Tata McGraw-Hill Education, 2008
3. Gupta. P. K, Man Mohan, Kanti Swarup: "Operations Research", Sultan Chand, 2008.

## Unit-11

---

### Critical Path method (CPM)

#### STRUCTURE

##### Overview

Objectives

11.1. Critical Path Method (CPM)

11.2. Solved Problems

Let us Sum Up

Check your progress

Glossary

Answers to check your progress

Suggestions

---

#### Overview

In this unit we are going to deal with the critical path method to get the optimal cost of a problem.

---

#### Objectives

After studying this unit, the students will be able to solve Critical Path Method (CPM)

---

#### 11.1. Critical Path Method (CPM)

The Critical Path Method (CPM) aims at the determination of the time to complete a project and the important activities on which a manager shall focus attention.

#### Project Completion Time

From the start event to the end event, the time required to complete all the activities of the project in the specified sequence is known as the project completion time.

#### Path in a Project

A continuous sequence, consisting of nodes and activities alternatively, beginning with the start event and stopping at the end event of a network is called a path in the network.

#### Critical Path and Critical Activities

The path with the largest time is called the **critical path** and the activities along this path are called the **critical activities** or **bottle neck activities**.

Solved Problems Problem1:

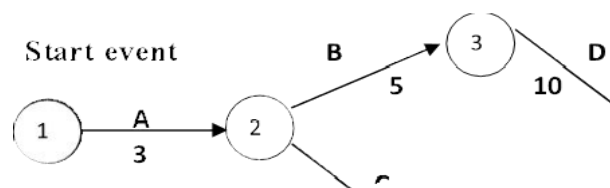
The following details are available regarding a project:

Activity	Predecessor Activity	Duration (Weeks)
A	-	3
B	A	5
C	A	7
D	B	10
E	C	5
F	D,E	4

Determine the critical path, the critical activities and the project completion time.

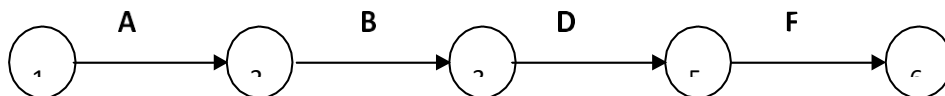
**Solution:**

First let us construct the network diagram for the given project. We mark the time estimates along the arrows representing the activities.



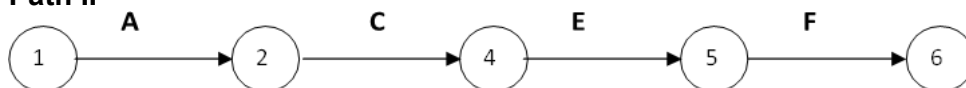
Consider the paths, beginning with the start node and stopping with the end node. There are two such paths for the given project. They are as follows:

**Path I**



With a time of  $3+5+10+4=22$  weeks.

**Path II**



With a time of  $3+7+5+4=19$  weeks.

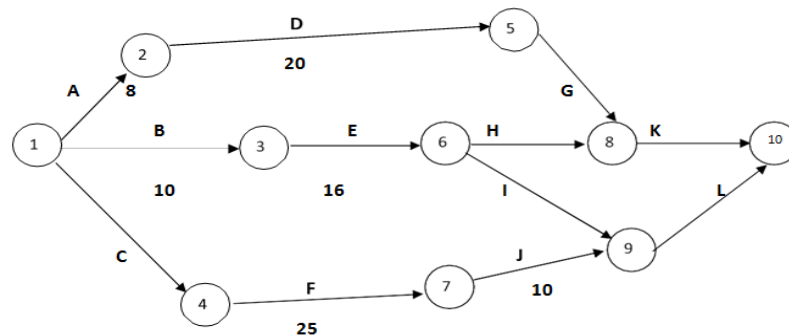
Compare the times for the two paths. Maximum of  $\{22, 19\} = 22$ . We see that path I has the maximum time of 22 weeks. Therefore, path I is the critical path. The critical activities are A,B,D and F. The project completion time is 22 weeks.

We notice that C and E are non-critical activities. Time for path I - Time for path II =  $22 - 19 = 3$  weeks.

Therefore, together the non-critical activities can be delayed up to a maximum of 3 weeks, without delaying the completion of the whole project.

**Problem 2:**

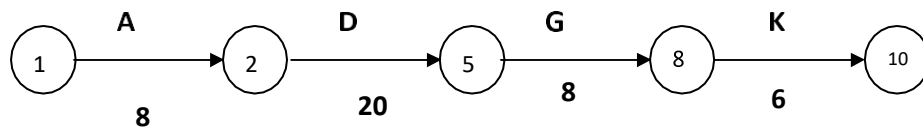
Find out the completion time and the critical activities for the following project:



**Solution:**

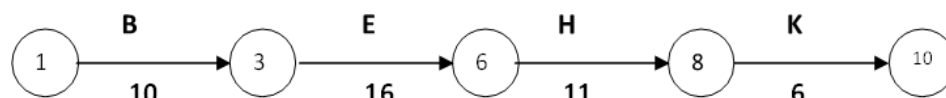
In all, we identify 4 paths, beginning with the start node of 1 and terminating at the end node of 10. They are as follows:

**Path I**



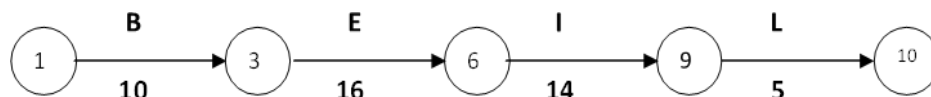
Time for the path =  $8 + 20 + 8 + 6 = 42$  units of time.

**Path II**



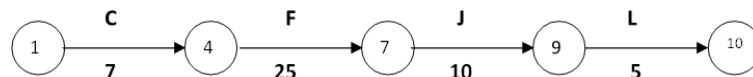
Time for the path =  $10 + 16 + 11 + 6 = 43$  units of time.

**Path III**



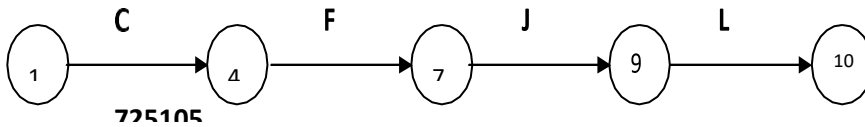
Time for the path =  $10 + 16 + 14 + 5 = 45$  units of time.

**Path IV**



Time for the path = 7+25+ 10+ 5 = 47 units of time.

Compare the times for the four paths. Maximum of {42,43,45,47} = 47.



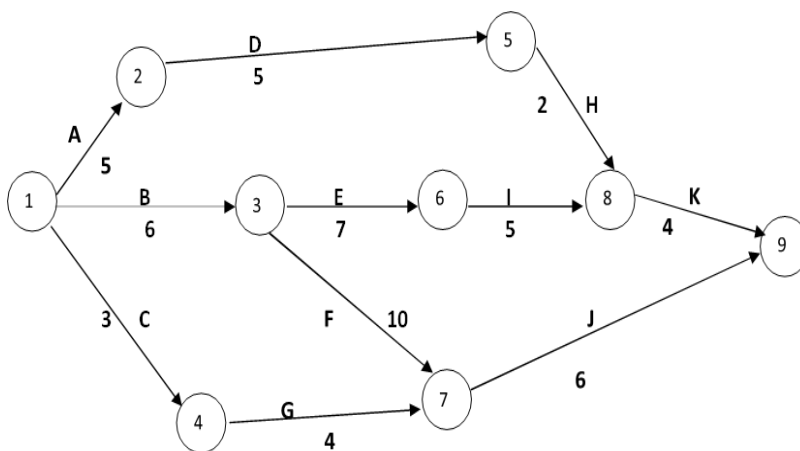
The critical activities are C,F,J and L. The non-critical activities are A,B,D,E,G,H,I and K. The project completion time is 47 units of time.

**Problem3:**

Draw the network diagram and determine the critical path for the following project:

Activity	Time estimate (Weeks)
1-2	5
1-3	6
1-4	3
2-5	5
3-6	7
3-7	10
4-7	4
5-8	2
6-8	5
7-9	6
8-9	4

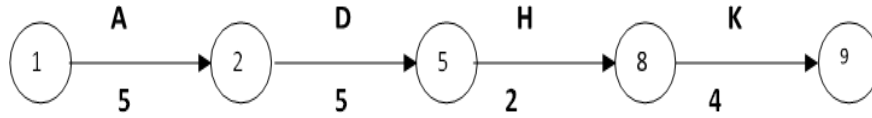
**Solution:** We have the following network diagram for the project:





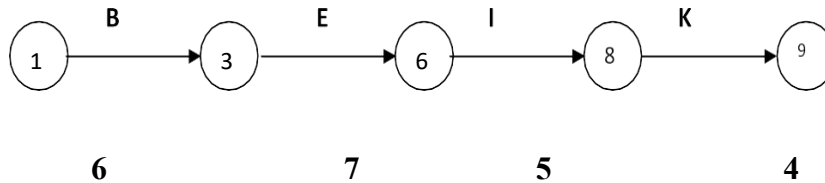
**Solution:**

**Path I**



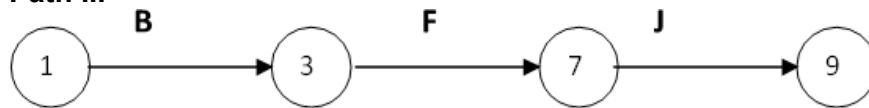
Time for the path =  $5+5+2+4 = 16$  weeks.

**Path II**



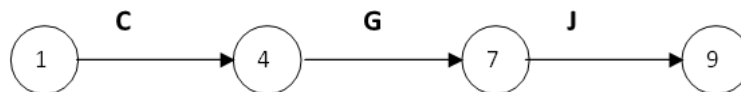
Time for the path =  $6+7+5+4 = 22$  weeks.

**Path III**



Time for the path =  $6+10+6 = 16$  weeks.

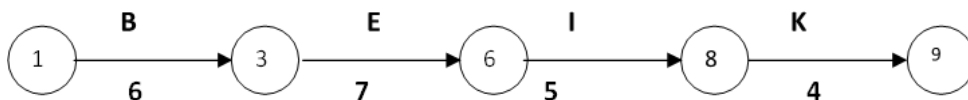
**Path IV**



Time for the path =  $3+4+6 = 13$  weeks.

Compare the times for the four paths. Maximum of  $\{16,22,16,13\} = 22$ .

We see that the following path has the maximum time and so it is the critical path:



The critical activities are B,E,I and K. The non-critical activities are A,C,D,F,G,H and J. The project completion time is 22 weeks.

---

## Let us Sum Up

---

In this unit, the students have learned to solve Critical Path Method (CPM).

---

## Check your progress

---

1. In PERT chart, the activity time distribution is
  - a. Normal
  - b. Binomial
  - c. Poisson
  - d. Beta
2. Critical path method is good for
  - a. Small project only
  - b. Large project only
  - c. Both small and large project
  - d. None of the above
3. In construction project planning, free float can affect which of the following?
  - a. Only that particular activity
  - b. Succeeding activity
  - c. Overall completion
  - d. Preceding activity

---

## Glossary

---

**Path:** A continuous sequence, consisting of nodes and activities alternatively, beginning with the start event and stopping at the end event of a network is called a path in the network.

**Critical Path Method (CPM):** The method for determination of the time to complete a project and the important activities on which a manager shall focus attention.

---

**Answers to check your progress**

---

1.d

2.b

3.d

---

**Suggested Readings**

---

1. Frederick Hillier, Gerald J. Lieberman, Bodhibroto Nag, Preetam Basu, "Introduction to Operation Research", McGraw Hill, 11th edition, ISSN: 9354601200, 2021.
2. Sankar P. Iyer, Operations Research, Tata McGraw-Hill Education, 2008
3. Gupta. P. K, Man Mohan, Kanti Swarup: "Operations Research", Sultan Chand, 2008.

## Unit-12

---

# Program Evaluation Review Technique (PERT)

### STRUCTURE

Overview

Objectives

12.1. Program Evaluation Review Technique (PERT)

12.2. Solved Problems

Let us Sum Up

Check your progress

Glossary

Answers to check your progress

Suggestions

---

### Overview

It is used to help in project planning and control. The project manager can monitor the project continuously and take necessary steps to get the optimal cost.

---

### Objectives

After studying this unit, the students will be able:

- to solve Programme Evaluation and Review Technique (PERT)

---

### 12.1. Program Evaluation Review Technique (PERT)

Programme Evaluation and Review Technique (**PERT**) is a tool that would help a project manager in project planning and control. It would enable him in continuously monitoring a project and taking corrective measures wherever necessary. This technique involves statistical methods.

Note that in CPM, the assumption is that precise time estimate is available for each activity in a project. However, one finds most of the times that this is not practically possible.

In PERT, we assume that it is not possible to have precise time estimate for each activity and instead, probabilistic estimates of time alone responsible. A multiple time estimate approach is followed here. In probabilistic time estimate, the following 3 types of estimate are possible:

1. Pessimistic time estimate ( $t_p$ )
2. Optimistic time estimate ( $t_o$ )
3. Most likely time estimate ( $t_m$ )

The optimistic estimate of time is based on the assumption that an activity will not involve any difficulty during execution and it can be completed within a short period. On the other hand, a pessimistic estimate is made on the assumption that there would be unexpected problems during the execution of an activity and hence it would consume more time. The most likely time estimate is made in between the optimistic and the pessimistic estimates of time.

Thus the three estimates of time have the relationship

$$t_o \leq t_m \leq t_p.$$

Practically speaking, neither the pessimistic nor the optimistic estimate may hold in reality and it is the most likely time estimate that is expected to prevail in almost all cases. Therefore, it is preferable to give more weight to the most likely time estimate.

We give a weight of 4 to most likely time estimate and a weight of 1 each to the pessimistic and optimistic time estimates. We arrive at a time estimate ( $t_e$ ) as the weighted average of these estimates as follows:

$$t_e = \frac{t_o + 4t_m + t_p}{6}$$

Since we have taken 6 units (1 for  $t_p$ , 4 for  $t_m$  and 1 for  $t_o$ ), we divide the sum by 6. With this time estimate, we can determine the project completion time as applicable for CPM.

Since PERT involves the average of three estimates of time for each activity, this method is very practical and the results from PERT will behave a reasonable amount of reliability.

### Measure of Certainty

The 3 estimates of time are such that

$$t_o \leq t_m \leq t_p. \text{ Therefore the range for the time estimate is } t_p - t_o.$$

The time taken by an activity in a project network follows a distribution with a standard deviation of one sixth of the range, approximately.

i.e., The standard deviation =  $\sigma = \frac{t_p - t_o}{6}$  and the

$$\text{variance} = \frac{\sigma^2 (t_p - t_o)^2}{6}$$

The certainty of the time estimate of an activity can be analysed with the help of the variance. The greater the variance, the more uncertainty in the time estimate of an activity.

## 12.2. Solved Problems

### Problem1:

Two experts A and B examined an activity and arrived at the following time estimates.

	$t_o$	$T_m$	$t_p$
A	4	6	8
B	4	7	10

Determine which expert is more certain a both is estimates of time:

### Solution:

#### Variance( $\sigma^2$ )in time estimates $t_p - t_o = ()$

In the case of expert A, the variance  $8 - 4^2 = () = 66$

As regards expert B, the variance

$$10 - 4^2 = () = 16$$

So, the variance is less in the case of A. Hence, it is concluded that the expert A is more certain a both is estimates of time.

### Problem2:

Find out the time required to complete the following project and the critical activities:

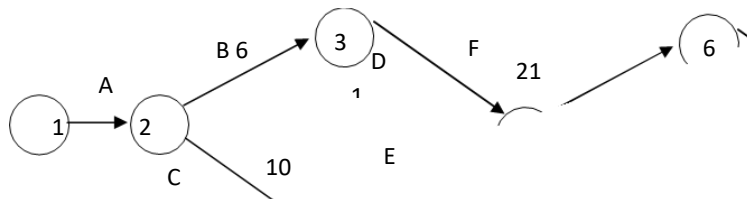
Activity	Predecessor Activity	Optimistic time Estimate (to days)	Most likely time estimate (tm days)	Pessimistic Time estimate (tpdays)
A	-	2	4	6
B	A	3	6	9
C	A	8	10	12
D	B	9	12	15
E	C	8	9	10
F	D,E	16	21	26
G	D,E	19	22	25
H	F	2	5	8
I	G	1	3	5

**Solution:**

From the three time estimates  $t_p$ ,  $t_m$  and  $t_o$ , calculate  $t_e$  for each activity. We obtain the following table:

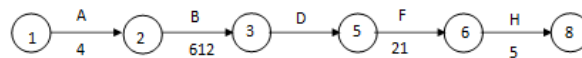
Activity	Optimistic time estimate ( $t_o$ )	4 x Most likely time estimate	Pessimistic time estimate( $t_p$ )	$t_o+4t_m+t_p$	Time estimate $t_e = \frac{t_o + 4t_m + t_p}{6}$
A	2	16	6	24	4
B	3	24	9	36	6
C	8	40	12	60	10
D	9	48	15	72	12
E	8	36	10	54	9
F	16	84	26	126	21
G	19	88	25	132	22
H	2	20	8	30	5
I	1	12	5	18	3

Using the single time estimates of the activities, we get the following network diagram for the project.

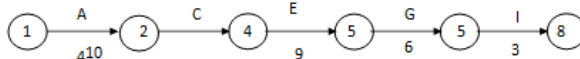


Consider the paths, beginning with the start node and stopping with the end node. There are four such paths for the given project. They are as follows:

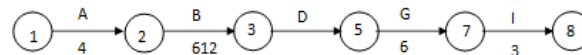
**Path I**



Time for the path:  $4+6+12+21+5 = 48$  days.

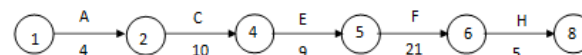


**Path II**



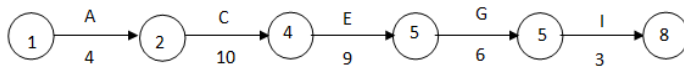
Time for the path:  $4+6+12+6+3 = 31$  days.

**Path III**



Time for the path:  $4+10+9+21+5 = 49$ days.

Path IV



Time for the path:  $4+10+9+6+3 = 32$ days. Compare the times for the four paths.

Maximum of  $\{48,31,49,32\} = 49$ .

We see that Path III has the maximum time.

Therefore the critical path is Path III. i.e.,  $1 \rightarrow 2 \rightarrow 4 \rightarrow 5 \rightarrow 6 \rightarrow 8$ . The critical activities are A,C, E, F and H.

The non-critical activities are B, D, G and I. Project time (Also called project length) = 49 days.

**Problem 3:**

Find out the time, variance and standard deviation of the project with the following time estimates in weeks:

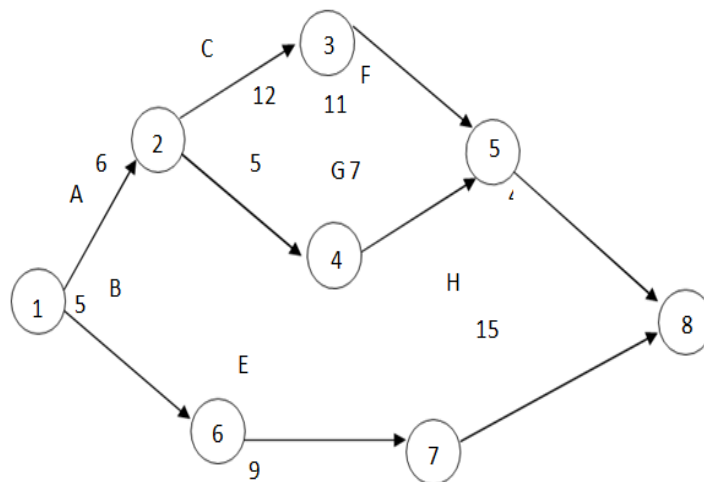
Activity	Optimistic time estimate( $t_o$ )	Most likely time estimate( $t_m$ )	Pessimistic time estimate( $t_p$ )
1-2	3	6	9
1-6	2	5	8
2-3	6	12	18
2-4	4	5	6
3-5	8	11	14
4-5	3	7	11
6-7	3	9	15
5-8	2	4	6
7-8	8	16	18



**Solution:**

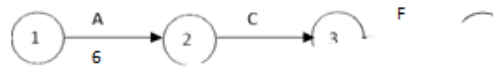
We obtain the following table:

Activity	Optimistic time estimate (to)	4xMost likely time estimate	Pessimistic time estimate(tp)	to+4tm+tp	Time estimate $t_e$ $t_o + 4t_m + t_p = 6$
1-2	3	24	9	36	6
1-6	2	20	8	30	5
2-3	6	48	18	72	12
2-4	4	20	6	30	5
3-5	8	44	14	66	11
4-5	3	28	11	42	7
6-7	3	36	15	54	9
5-8	2	16	6	24	4
7-8	8	64	18	90	15



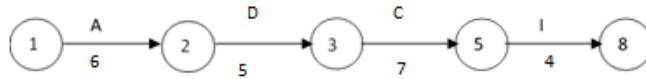
Consider the paths, beginning with the start node and stopping with the end node. There are three such paths for the given project. They are as follows:

**Path I**



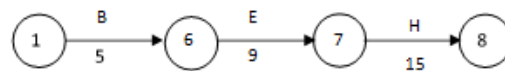
Time for the path:  $6+12+11+4 = 33$  weeks.

**Path II**



Time for the path:  $6+5+7+4 = 22$  weeks.

**Path III**



Time for the path:  $5+9+15 = 29$  weeks.

Compare the times for the three paths. Maximum of  $\{33,22,29\} = 33$ .

It is noticed that Path I has the maximum time.

Therefore the critical path is Path I .i.e.,  $1 \rightarrow 2 \rightarrow 3 \rightarrow 5 \rightarrow 8$  The critical activities are A,C,F and I.

The non-critical activities are B, D, G and H. Project time = 33weeks.

**Calculation of Standard Deviation and Variance for the Critical Activities:**

Critical Activity	Optimistic Time estimate( $t_o$ )	Most likely Time estimate( $t_m$ )	Pessimistic Time estimate( $t_p$ )	Range ( $t_p - t_o$ )	Standard deviation= $\frac{t_p - t_o}{\sigma} = 6$	Variance $t_p - t_o^2 \sigma^2 = () 6$
A:1→2	3	6	9	6	1	1
C:2→3	6	12	18	12	2	4
F:3→5	8	11	14	6	1	1
I:5→8	2	4	6	4	2/3	4/9

Variance of project time

(Also called Variance of project length ) = Sum of the variances for the critical activities

$=1+4+1+4/9 = 58/9$  Weeks.

Standard deviation of project time =  $\sqrt{\text{Variance}}$

=  $\sqrt{58/9}$

= 2.54 weeks.

**Problem 4**

A project consists of seven activities with the following time estimates. Find the probability that the project will be completed in 30 weeks or less.

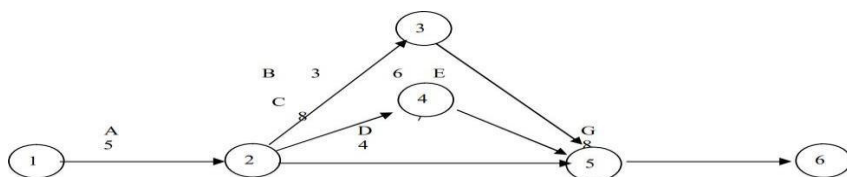
Activity	Predecessor Activity	Optimistic time Estimate (to days)	Most likely time estimate (tm days)	Pessimistic time estimate (tp days)
A	-	2	5	8
B	A	2	3	4
C	A	6	8	10
D	A	2	4	6
E	B	2	6	10
F	C	6	7	8
G	D,E,F	6	8	10

**Solution:**

From the three time estimates  $t_p, t_m$  and  $t_o$ , calculate  $t_e$  for each activity.

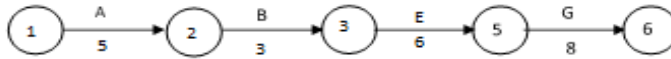
Activity	Optimistic time estimate (to)	4 x Most likely time estimate	Pessimistic time estimate (tp)	$t_o + 4t_m + t_p$	Time estimate $t_o + 4t_m + t_p$ $t_e = 6$
A	2	20	8	30	5
B	2	12	4	18	3
C	6	32	10	48	8
D	2	16	6	24	4
E	2	24	10	36	6
F	6	28	8	42	7
G	6	32	10	48	8

With the single time estimates of the activities, the following network diagram is constructed for the project.



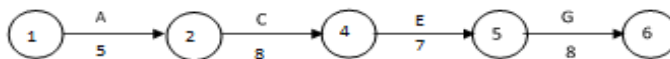
Consider the paths, beginning with the start node and stopping with the end node. There are three such paths for the given project. They are as follows:

**Path I**



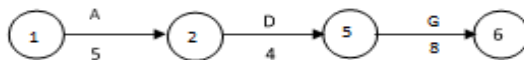
Time for the path:  $5+3+6+8 = 22$  weeks.

**Path II**



Time for the path:  $5+8+7+8 = 28$  weeks.

**Part III**



Time for the path:  $5+4+8=17$  weeks. Compare the times for the three paths. Maximum of  $\{22,28,17\}=28$ .

It is noticed that Path II has the maximum time. Therefore the critical path is Path II.i.e.,  $1 \rightarrow 2 \rightarrow 4 \rightarrow 5 \rightarrow 6$ . The critical activities are A,C,F and G.

The non-critical activities are B,D and E. Project time = 28weeks.

**Calculation of Standard Deviation and Variance for the Critical Activities:**

Critical Activity	Optimistic time estimate (to)	Most likely time estimate (tm)	Pessimistic time estimate (tp)	Range (tp-to)	Standard deviation= $\frac{tp-to}{\sigma =6}$	Variance $t_p - t_o^2$ $\sigma^2 = ($
A:1→2	2	5	8	6	1	1
C:2→4	6	8	10	4	2 — 3	4 — 9
F:4→5	6	7	8	2	1 — 3	1 — 9
G:5→6	6	8	10	4	2 — 3	4 — 9

Standard deviation of the critical path =  $\sqrt{2} = 1.414$ . The standard normal variate is given by the formula:

$$Z = \frac{\text{value of } t - \text{Expected value of } t \text{ in the critical path}}{SD \text{ for the critical path}}$$

So we get  $Z = \frac{30-28}{1.414} = 1.414$

1.414

We refer to the Normal Probability Distribution Table. Corresponding to  $Z=1.414$ , we obtain the value of 0.4207 we get  $0.5+0.4207 = 0.9207$

Therefore the required probability is 0.92. i.e., there is 92 % chance that the project will be completed before 30 weeks. In other words, the chance that it will be delayed beyond 30 weeks is 8%

---

### Let us Sum Up

---

In this unit, the students have learned to solve Programme Evaluation and Review Technique (PERT).

---

### Check your progress

---

1. A feasible solution is called a basic feasible solution if the number of non-negative allocations is equal to \_\_\_\_\_
  - a.  $M-n+1$
  - b.  $m-n-1$
  - c.  $m+n-1$
  - d. None of the above
2. Any feasible solution to a transportation problem containing  $m$  origins and  $n$  destinations is said to be \_\_\_\_\_
  - a. Independent
  - b. Degenerate
  - c. Non-degenerate
  - d. Both A and B
3. A path formed by allowing horizontal and vertical lines and the entire corner cells of which are occupied is called a \_\_\_\_\_
  - a. Occupied path
  - b. Open path
  - c. Closed path
  - d. None of the above

---

## Glossary

---

- Pessimistic time estimate ( $t_p$ ):** The optimistic estimate of time is based on the assumption that an activity will not involve any difficulty during execution and it can be completed within a short period
- Optimistic time estimate ( $t_o$ ):** The pessimistic estimate is made on the assumption that there would be unexpected problems during the execution of an activity and hence it would consume more time.
- Most likely time estimate ( $t_m$ ):** The most likely time estimate is made in between the optimistic and the pessimistic estimates of time. Thus the three estimates of time have the relationship.

---

## Answer to check your progress

---

1. c
2. c
3. c

---

## Suggested Readings

---

1. Frederick Hillier, Gerald J. Lieberman, Bodhibroto Nag, Preetam Basu, "Introduction to Operation Research", McGraw Hill, 11th edition, ISSN: 9354601200, 2021.
2. Sankar P. Iyer, Operations Research, Tata McGraw-Hill Education, 2008
3. Gupta. P. K, Man Mohan, Kanti Swarup: "Operations Research", Sultan Chand, 2008.

---

**Block-4: Introduction**

---

**Block-4: Game Theory** has been divided in to Four Units. **Unit-13: Zero-sum games and Non-zero sum games** – Introduction, Basic Concepts, Example

**Unit-14: Pure & Mixed Strategy-** Introduction, Pure & Mixed Strategy

**Unit-15: Maximin-Minimax Principle** - Maximin–Minimax Principle, Solved Problems.

**Unit-16: Dominance Property** - Dominance Property, Solved Problems

In all the units of Block -4 **Game Theory**, the Check your progress, Glossary, Answers to Check your progress and Suggested Reading has been provided and the Learners are expected to attempt all the Check your progress as part of study.

## Unit -13

---

### Zero-sum games and Non-zero sum games

#### STRUCTURE

##### Overview

Objectives

13.1. Introduction

13.2. Basic Concepts

13.3. Example

Let us Sum Up

Check your progress

Glossary

Answers to check your progress

Suggestions

---

#### Overview

In this unit we are going to focus on the mathematical framework for analyzing the decision making processes and strategies of adversaries i.e. the players. Simple strategy involved are noted down to attain the solution.

---

#### Objectives

After studying this unit, the students will be able:

- to understand the Zero-sum games and Non- zero sum games.

---

#### 13.1. Introduction

Game theory provides a mathematical framework for analysing the decision-making processes and strategies of adversaries (or *players*) in different types of competitive situations. The simplest type of competitive situations is *two-person, zero-sum games*. These games involve only two players; they are called *zero-sum* games because one player wins whatever the other player loses. As we have seen, the Nash equilibrium and the maximin are two different concepts that reflect different behavioural aspects: the first is an expression of stability, while the second captures the notion of security. Despite the different roots of the two concepts, there are cases in which both lead to the same results. A special case where this occurs is in the class of two- player zero-sum games, which is the subject of this section. A two-player game is called



a *zero-sum* game if the sum of the payoffs to each player is constant for all possible outcomes of the game. More specifically, the terms (or coordinates) in each payoff vector must add up to the same value for each payoff vector. Such games are sometimes called *constant-sum* games instead.

A two-player game is a zero-sum game if for each pair of strategies  $(s_I, s_{II})$  one has

$$(s_I, s_{II}) + (s_{II}, s_I) = 0.$$

In other words, a two-player game is a zero-sum game if it is a closed system from the perspective of the payoffs: each player gains what the other player loses. It is clear that in such a game the two players have diametrically opposed interests.

### 13.2. Basic Concepts

This game of odds and evens illustrates important concepts of simple games.

- A two-person game is characterized by the strategies of each player and the payoff matrix.
- The payoff matrix shows the gain (positive or negative) for player 1 that would result from each combination of strategies for the two players. Note that the matrix for player 2 is the negative of the matrix for player 1 in a zero-sum game.
- The entries in the payoff matrix can be in any units as long as they represent the utility (or value) to the player.
- There are two key assumptions about the behavior of the players. The first is that both players are rational. The second is that both players are greedy meaning that they choose their strategies in their own interest (to promote their own wealth).

### 13.3. Example

		Player II			$\min_{s_{II} \in S_{II}} u_I(s_I, s_{II})$
		L	C	R	
Player I	T	3, -3	-5, 5	-2, 2	-5
	M	1, -1	4, -4	1, -1	1
	B	6, -6	-3, 3	-5, 5	-5
$\min_{s_I \in S_I} u_{II}(s_I, s_{II})$		-6	-4	-1	1, -1

**Example 13.1** Consider the two-player game appearing in Figure 13.1.

**Figure 13.1 A two-player zero-sum game**

In this example,  $v_I = 1$  and  $v_{II} = -1$ . The maxmin strategy of Player I is M and that of Player II is R. The strategy pair (M, R) is also the equilibrium of this game (check!). In other words, here we have a case where the vector of maxmin strategies is also an equilibrium point: the two concepts lead to the same result.

In the game in Example 13.1, for each pair of strategies the sum of the payoffs that the two players receive is zero. In other words, in any possible outcome of the game the payoff one player receives is exactly equal to the payoff the other player has to pay.

		Player II		
		L	C	R
Player I	T	3	-5	-2
	M	1	4	1
	B	6	-3	-5

**Figure 13.2 The payoff function  $u$  of the zero-sum game in Example 13.1**

The study of two-player zero-sum games. Since the payoffs  $u_I$  and  $u_{II}$  satisfy

$$u_I + u_{II} = 0, \quad (13.20)$$

we can confine our attention to one function,  $u_I = u$ , with  $u_{II} = -u$ . The function  $u$  will be termed the payoff function of the game, and it represents the payment that Player II makes to Player I. Note that this creates an artificial asymmetry (albeit only with respect to the symbols being used) between the two players: Player I, who is usually the row player, seeks to maximize  $u(s)$  (his payoff) and Player II, who is usually the column player, is trying to minimize  $u(s)$ , which is what he is paying (since his payoff is  $-u(s)$ ).

The game in Example 13.1 can therefore be represented as shown in Figure 13.2.

The game of Matching Pennies can also be represented as a zero-sum game (see Figure 13.3).

		Player II	
		<i>H</i>	<i>T</i>
Player I	<i>H</i>	1	-1
	<i>T</i>	-1	1

**Figure 13.3 The payoff function  $u$  of the game Matching Pennies**

Consider now the maxmin values of the players in a two-player zero-sum game. Player I's maxmin value is given by,

$$v_I = \max_{s_I \in S_I} \min_{s_{II} \in S_{II}} u(s_I, s_{II}), \quad (13.21)$$

and Player II's maxmin value is

$$v_{II} = \max_{s_{II} \in S_{II}} \min_{s_I \in S_I} (-u(s_I, s_{II})) = - \min_{s_{II} \in S_{II}} \max_{s_I \in S_I} u(s_I, s_{II}) \quad (13.22)$$

		Player II		$\min_{s_{II} \in S_{II}} u_I(s_I, s_{II})$
		<i>L</i>	<i>R</i>	
Player I	<i>T</i>	-2	5	-2
	<i>B</i>	3	0	0
$\max_{s_I \in S_I} u_{II}(s_I, s_{II})$		3	5	(0, 3)

**Figure 13.4 A game in strategic form with the maxmin and minmax values**

**Denote**

$$\underline{v} := \max_{s_I \in S_I} \min_{s_{II} \in S_{II}} u(s_I, s_{II}) \quad (13.23)$$

$$s_I \in S_I, s_{II} \in S_{II}$$

$$v := \min_{s_{II} \in S_{II}} \max_{s_I \in S_I} u(s_I, s_{II}) \quad (13.24)$$

$$s_I \in S_I, s_{II} \in S_{II}$$

The value  $\underline{v}$  is called the maxmin value of the game, and  $v$  is called the minmax value. Player I can guarantee that he will get at least  $\underline{v}$ , and Player II can guarantee that he will pay no more than  $v$ . A strategy of Player I that guarantee  $\underline{v}$  is termed a maxmin strategy. A strategy of Player II that guarantees  $v$  is called a minmax strategy.

We next calculate the maxmin value and minmax value in various examples of games. In Example 13.1,  $\underline{v} = 1$  and  $\bar{v} = 1$ . In other words, Player I can guarantee that he will get a payoff of at least 1 (using the maxmin strategy M), while Player II can guarantee that he will pay at most 1 (by way of the minmax strategy R).

Consider the game shown in Figure 4.35. In this figure we have indicated on the right of each row the minimal payoff that the corresponding strategy of Player I guarantees him. Beneath each column we have indicated the maximal amount that Player II will pay if he implements the corresponding strategy.

In this game  $\underline{v} = 0$  but  $\bar{v} = 3$ . Player I cannot guarantee that he will get a payoff higher than 0 (which he can guarantee using his maxmin strategy B) and Player II cannot guarantee that he will pay less than 3 (which he can guarantee using his minmax strategy L).

Finally, look again at the game of Matching Pennies (Figure 13.5)

		Player II		
		H	T	
Player I	H	1	-1	$\min_{s_{II} \in S_{II}} u_I(s_I, s_{II})$
	T	-1	1	
$\max_{s_I \in S_I} u_{II}(s_I, s_{II})$		1	1	$(-1, 1)$

**Figure 13.5 Matching Pennies with the maxmin and minmax values**

In this game,  $\underline{v} = -1$  and  $\bar{v} = 1$ . Neither of the two players can guarantee a result that is better than the loss of one dollar (the strategies H and T of Player I are both maxmin strategies, and the strategies H and T of Player II are both minmax strategies).

As these examples indicate, the maxmin value  $\underline{v}$  and the minmax value  $\bar{v}$  may be unequal, but it is always the case that  $\underline{v} \leq \bar{v}$ . The inequality is clear from the definitions of the maxmin and minmax: Player I can guarantee that he will get at least  $\underline{v}$ , while Player II can guarantee that he will not pay more than  $\bar{v}$ . As the game is a zero-sum game, the inequality  $\underline{v} \leq \bar{v}$  must hold.

We wish to stress that these theorems show that in two-player zero-sum games the concept of equilibrium, which is based on stability, and the concept of minmax, which is based on security levels, coincide. If security level considerations are important factors in determining players' behavior, one may expect that the concept of equilibrium will

have greater predictive power in two-player zero-sum 116 Strategic-form games (where equilibrium strategies are also minmax strategies) than in more general games in which the two concepts lead to different predictions regarding players' behavior.

Note that despite the fact that the strategic form of the game is implicitly a simultaneously played game in which each player, in selecting his strategy, does not know the strategy selected by the other player, if the game has a value, then each player can reveal the optimal strategy that he intends to play to the other player and still guarantees his maxmin value. Suppose that  $s^*$  is an optimal strategy for Player I in a game with value  $v$ . Then

$$\min_{s_{II} \in S_{II}} u(s^*, s_{II}) = v, \quad (13.25)$$

and therefore, for each  $s_{II} \in S_{II}$  the following inequality is satisfied:

$$u(s^*, s_{II}) \geq v. \quad (13.26)$$

**Theorem 13.1.1**

If a two-player zero-sum game has a value  $v$ , and if  $s^*$  and  $s^*$  are optimal strategies of the two

$I \quad II$

players, then  $s^* = (s^*, s^*)$  is an equilibrium with payoff  $(v, -v)$ .

$I \quad II$

**Proof:**

From the fact that both  $s^*$  and  $s^*$  are optimal strategies, we deduce that

$I \quad II$

$$u(s^*, s_{II}) \geq v, \quad \forall s_{II} \in S_{II}, \quad (13.27)$$

$$u(s_I, s^*) \leq v, \quad \forall s_I \in S_I. \quad (13.28)$$

Inserting  $s_{II} = s^*$  into Equation (13.27) we deduce  $u(s^*, s^*) \geq v$ , and inserting  $s_I = s^*$  into

$II \quad I \quad II \quad I$

Equation (13.28) we get  $u(s^*, s^*) \leq v$ . The equation  $v = u(s^*, s^*)$  follows. Equations (13.27)

$I \quad II \quad I \quad II$

and (13.28) can now be written as

$$u(s^*, s_{II}) \geq u(s^*, s^*), \forall s_{II} \in S_{II}, \quad (13.29)$$

$$u(s_I, s^*) \leq u(s^*, s^*), \forall s_I \in S_I, \quad (13.30)$$

and therefore  $(s^*, s^*)$  is an equilibrium with payoff  $(v, -v)$ .

**Theorem 13.1.2**

If  $s^* = (s^*, s^*)$  is an equilibrium of a two-player zero-sum game, then the game has a value,  $v$

$v = u(s^*, s^*)$ , and the strategies  $s^*$  and  $s^*$  are optimal strategies.

Proof :

Since  $(s^*, s^*)$  is an equilibrium, no player can benefit by a unilateral deviation:

$$u(s_I, s^*) \leq u(s^*, s^*), \forall s_I \in S_I \quad (13.31)$$

$$u(s^*, s_{II}) \geq u(s^*, s^*), \forall s_{II} \in S_{II}. \quad (13.32)$$

Let  $v = u(s^*, s^*)$ . We will prove that  $v$  is indeed the value of the game.

From Equation (13.31)

we get

$u(s^*, s_{II}) \geq v, \forall s_{II} \in S_{II},$   
 (13.33) and therefore  $v \geq v$ . From Equation (4.60) we deduce that

$$u(s_I, s^*) \leq v, \forall s_I \in S_I, \quad (13.34)$$

		Player II	
		<i>a</i>	<i>b</i>
Player I	<i>A</i>	1, 1	0, 0
	<i>B</i>	0, 0	3, 3

**Figure 13.6 Coordination game**

and therefore  $v \leq \underline{v}$ . Because it is always the case that  $\underline{v} \leq v$  we get

$$v \leq \underline{v} \leq v \leq v, \quad (13.35)$$

which implies that the value exists and is equal to  $v$ . Furthermore, from Equation (13.33) we deduce that  $s^*$  is an optimal strategy for Player I, and from Equation (13.34) we deduce that,

$s^*$  is an optimal strategy for Player II.

---

### Let us Sum Up

---

In this unit, the students have learned to understand the Zero-sum games and Non-zero sum games.

---

### Check your progress

---

1. General games involve \_\_\_\_\_
  - a. Single-agent
  - b. Multi-agent
  - c. Neither Single-agent nor multi-agent
  - d. Only Single-agent and multi-agent
2. Adversarial search problems use \_\_\_\_\_
  - a. Competitive Environment
  - b. Cooperative Environment
  - c. Neither Competitive nor Cooperative Environment
  - d. Only Competitive and Cooperative Environment
3. Mathematical game theory, a branch of economics, views any multi-agent environment as a game provided that the impact of each agent on the others is "significant," regardless of whether the agents are cooperative or competitive.
  - a. True
  - b. False

---

## **Glossary**

---

**Game theory:** A mathematical framework for analysing the decision-making processes and strategies of adversaries (or players) in different types of competitive situations.

**Zero-sum game:** A game involves only two players; they are called zero-sum games because one player wins whatever the other player loses.

---

## **Answers to check your progress**

---

1. d

2. a

3. a

---

## **Suggested Readings**

---

1. Hamdy A. Taha, Operations Research-An introduction, Pearson Education, 8th Edition / Prentice Hall of India, 2007.
2. Tulsian, P. C., Vishal Pandey, Quantitative Techniques – Theory and Problems, Pearson Publications, 2006.
3. A. Ravindren, Don T. Phillips and James J. Solberg, Operations Research Principles and Practice, John Wiley and Sons, 2nd edition, 2000.



#### **STRUCTURE**

##### **Overview**

Objectives

14.1. Introduction

14.2. Pure and Mixed Strategy

Let us Sum Up

Glossary

Answers to check your progress

Suggestions

---

##### **Overview**

Proper strategy is chosen in a game. A new concept saddle point is introduced in this chapter where maximin = minimax.

---

##### **Objectives**

After studying this unit, the students will be able to understand the Pure & Mixed Strategy

---

##### **14.1. Introduction**

A “saddle point” in a two-person constant-sum game is the outcome that rational players would choose. A saddle point always exists in games of perfect information but may or may not exist in games of imperfect information. By choosing a strategy associated with this outcome, each player obtains an amount at least equal to his payoff at that outcome, no matter what the other player does. This payoff is called the value of the game; as in perfect-information games, it is preordained by the players’ choices of strategies associated with the saddle point, making such games strictly determined. A rectangular game without a saddle point cannot be solved using pure strategies or with minimax and Maximin criterion of optimality. So, in this case the best strategies are the mixed strategies. In this strategy the probability with which each action should be selected is calculated. The following theorem is followed to find the solution of a two person 2X2 pay off matrix without a saddle point.

---

## 14.2. Pure & Mixed Strategy

---

Usually, player in game theory uses two types of strategy namely pure strategy and mixed strategy.

### Pure Strategy

Particular course of action that are selected by player is called pure strategy (course of action). i.e. each player knows in advance of all strategies out of which he always selects only one particular strategy regardless of the other players strategy, and objective of the player is to maximize gain or minimize loss.

Pure Strategy is based on the following criteria.

- Maximin = Minimax
- Saddle Point exist
- Value of game exist
- Method: Maximin–Minimax Principle, Dominance Property

### Mixed Strategy:

Course of action that are to be selected on a particular occasion with some fixed probabilities are called mixed strategies. i.e there is a probabilistic situation and objective of the players is to maximize expected gain or minimize expected losses by making choice among pure strategy with fixed probabilities.

In mixed strategy, If there are 'n' number of pure strategies of the player, there exist a set  $S=\{p_1, p_2, \dots, p_n\}$  where  $p_j$  is the probability with which the pure strategy,  $j$  would be selected and whose sum is unity. i.e  $p_1+p_2+\dots+p_n=1$  and  $p_j \geq 0$  for all  $j=1,2,\dots, n$ .

In game theory, Strategy is a decision rule that describes the actions a player will take at each decision point.

Mixed Strategy is based on the following criteria.

- Maximin  $\neq$  Minimax
- No Saddle Point
- Value of game exist
- Method: Probability, Dominance Property

---

### Let us Sum Up

---

In this unit, the students have learned to understand the Pure and Mixed Strategy

---

## Check your progress

---

1. Zero sum games are the one in which there are two agents whose actions must alternate and in which the utility values at the end of the game are always the same.

- a. True
- b. False

2. Zero sum game has to be a \_\_\_\_\_ game.

- a. Single player
- b. Two player
- c. Multiplayer
- d. Three player

3. A game can be formally defined as a kind of search problem with the following components.

- a. Initial State
- b. Successor Function
- c. Terminal Test
- d. All of the mentioned

---

## Glossary

---

**Pure Strategy:** Particular course of action that are selected by player is called pure strategy (course of action). i.e. each player knows in advance of all strategies out of which he always selects only one particular strategy regardless of the other players strategy

**Mixed Strategy:** Course of action that are to be selected on a particular occasion with some fixed probabilities are called mixed strategies. i.e. there is a probabilistic situation and objective of the players is to maximize expected gain or minimize expected losses by making choice among pure strategy with fixed probabilities.

---

**Answers to check your progress**

---

1.b

2.c

3.d

---

**Suggested Readings**

---

1. Hamdy A. Taha, Operations Research-An introduction, Pearson Education, 8th Edition / Prentice Hall of India, 2007.
2. Tulsian, P. C., Vishal Pandey, Quantitative Techniques – Theory and Problems, Pearson Publications,2006.
3. A. Ravindren, Don T. Phillips and James J. Solberg, Operations Research Principles and Practice, John Wiley and Sons, 2nd edition, 2000.

---

# Maximin–Minimax Principle

### STRUCTURE

Overview

Objectives

15.1. Maximin–Minimax Principle

15.2. Solved Problems

Let us Sum Up

Check your progress

Glossary

Answers to check your progress

Suggestions

---

### Overview

---

In this Unit we are going to deal with the pure strategy and mixed strategy.

---

### Objectives

---

After studying this unit, the students will be able:

- to understand and solve the Maximin– Minimax Principle

---

### 15.1. Maximin – Minimax Principle

---

Minimax means Minimum of Column Maxima. It is to minimize the maximum loss. (defensive). Maximin means Maximum of Row Minima. It is to maximize the minimum gain (offensive).

Strategy is based on the Maximin–Minimax Principle

- Pure: Maximin = Minimax
- Mixed: Maximin  $\neq$  Minimax

For every finite two-person zero-sum game,

- Consider a game with two players A and B in which player A has  $m$  strategies (moves) and player B has  $n$  strategies (moves).
- The game can be described in the form of a payoff matrix such that the cell entry  $a_{ij}$  is the payment to A in A's payoff matrix when A chooses the  $i^{\text{th}}$  strategy and B chooses the  $j^{\text{th}}$  strategy.
- There is a number  $v$ , called the value of the game

- There is a mixed strategy for Player A such that A's average gain is at least  $v$  no matter what Player B does, and
- There is a mixed strategy for Player B such that B's average loss is at most  $v$  no matter what Player A does.
- Player A wishes to maximize his gain while player B wishes to minimize his loss.
- Since player A would like to maximize his minimum gain, we obtain the maximin value for player A and the corresponding strategy is called the maximin strategy. Player A's corresponding gain is called the maximin value or lower value ( $v$ ) of the game.
- At the same time, player B wishes to minimize his maximum loss, we obtain the minimax value for player B and the corresponding strategy is called the minimax strategy. Player B's corresponding loss is called the minimax value or upper value( $v$ ) of the game.
- Usually the minimax value is greater than or equal to the maximin value. If the equality holds, i.e., then the corresponding pure strategies are called optimal strategies and the game is said to have a saddle point.

$$\max_i \min_j a_{ij} = \min_j \max_i a_{ij} = v$$

---

## 15.2. Solved Problems

---

Solve the following game whose payoff matrix is given below by Maximin–Minimax Principle. For the game with the following payoff matrix, determine the best strategies for Player A and B, and also determine the value of the game.

	<b>B1</b>	<b>B2</b>	<b>B3</b>	<b>B4</b>	<b>B5</b>
<b>A1</b>	2	4	3	8	4
<b>A2</b>	5	6	3	7	8

<b>A3</b>	<b>6</b>	<b>7</b>	<b>9</b>	<b>8</b>	<b>7</b>
<b>A4</b>	<b>4</b>	<b>2</b>	<b>8</b>	<b>4</b>	<b>2</b>

						<b>Row Minima</b>
	<b>B<sub>1</sub></b>	B <sub>2</sub>	B <sub>3</sub>	B <sub>4</sub>	B <sub>5</sub>	
A <sub>1</sub>	2	4	3	8	4	2
A <sub>2</sub>	5	6	3	7	8	3
<b>A<sub>3</sub></b>	<b>6</b>	7	9	8	7	<b>6</b>
A <sub>4</sub>	4	2	8	4	2	2
<b>Column Maxima</b>	<b>6</b>	7	9	8	8	

Maximin–Minimax Principle

Maximin (Maximum of Row Minima); Minimax (Minimum of Column Maxima) Maximin = Minimax

$$6 = 6$$

Pure Strategy Saddle Point = A3B1

Value of the game = 6

### Let us Sum Up

In this unit, the students have learned to understand and solve the Maximin–Minimax Principle

### Check your progress

1. The initial state and the legal moves for each side define the \_\_\_\_\_ for the game.

- Search Tree
- Game Tree
- State Space Search
- Forest

2.The minimax algorithm computes the minimax decision from the current state. It uses a simple recursive computation of the minimax values of each successor state, directly implementing the defining equations. The recursion proceeds all the way down to the leaves of the tree, and then the minimax values are backed up through the tree as the recursion unwinds.

- a. True
- b. False

3.What is the saddle point?

- a. Point where function has maximum value
- b. Point where function has minimum value
- c. Point where function has zero value
- d. Point where function neither have maximum value nor minimum value

---

### **Glossary**

---

**Minimax:** Minimum of Column Maxima. It is to minimize the maximum loss. (defensive).

**Maximin:** Maximum of Row Minima. It is to maximize the minimum gain (offensive).

---

### **Answers to check your progress**

---

- 1.b
- 2.a
- 3.d

---

### **Suggested Readings**

---

1. Hamdy A. Taha, Operations Research-An introduction, Pearson Education, 8th Edition / Prentice Hall of India, 2007.
2. Tulsian, P. C., Vishal Pandey, Quantitative Techniques – Theory and Problems, Pearson Publications,2006.
3. A. Ravindren, Don T. Phillips and James J. Solberg, Operations Research Principles and Practice, John Wiley and Sons, 2nd edition, 2000.



# Unit-16

---

## Dominance Property

### STRUCTURE

Overview

Objectives

16.1. Dominance Property

16.2. Solved Problems

Let us Sum Up

Glossary

Answers to check your progress

Suggestions

---

### Overview

---

If one strategy of a player dominates over the other strategy in all conditions then the later strategy can be ignored.

---

### Objectives

---

After studying this unit, the students will be able to understand and solve the Dominance Property

---

### 16.1. Dominance Property

---

- Dominant property or strategy states that if one strategy of a player dominates over the other strategy in all conditions then the later strategy can be ignored.
- The rule of dominance are used to reduce the size of payoff matrix. These rule helps in deleting certain rows and columns of the payoff matrix that are inferior (less attractive).

### Dominance Principle

- **Row (Minima):** If all the elements of a row (say  $i$ th row) are less than or equal to the corresponding elements of any other row (say  $j$ th row), then the  $i$ th row is dominated by the  $j$ th row and can be deleted from the matrix.

**Column (Maxima):** If all the elements of a column (say  $i$ th column) are greater than or equal to the corresponding elements of any other column (say  $j$ th column), then the  $i$ th column is dominated by the  $j$ th column and can be deleted from the matrix.

## 16.2. Solved Problems

Solve the following game whose payoff matrix is given below by Dominance Principle. For the game with the following payoff matrix, determine the best strategies for Player A and B, and also determine the value of the game.

	B1	B2	B3	B4	B5
A1	2	4	3	8	4
A2	5	6	3	7	8
A3	6	7	9	8	7
A4	4	2	8	4	2

	B <sub>1</sub>	B <sub>2</sub>	B <sub>3</sub>	B <sub>4</sub>	B <sub>5</sub>
<del>A<sub>1</sub></del>	<del>2</del>	<del>4</del>	<del>3</del>	<del>8</del>	<del>4</del>
A <sub>2</sub>	5	6	3	7	8
A <sub>3</sub>	6	7	9	8	7
A <sub>4</sub>	4	2	8	4	2

### Row Minima – Minimum

A <sub>1</sub>	2↓	4↓	3 =	8	4↓	A <sub>1</sub>	2↓	4↓	3↓	8 =	4↓
A <sub>2</sub>	5	6	3	7↓	8	A <sub>3</sub>	6	7	9	8	7

**A<sub>1</sub> & A<sub>2</sub> – No Dominance      A<sub>1</sub> – Dominance**

	B <sub>1</sub>	B <sub>2</sub>	B <sub>3</sub>	B <sub>4</sub>	B <sub>5</sub>
A <sub>2</sub>	5	6	3	7	8
A <sub>3</sub>	6	7	9	8	7
<del>A<sub>4</sub></del>	<del>4</del>	<del>2</del>	<del>8</del>	<del>4</del>	<del>2</del>

### Row Minima – Minimum

A <sub>2</sub>	5↓	6↓	3↓	7↓	8	A <sub>2</sub>	5	6	3↓	7	8
A <sub>3</sub>	6	7	9	8	7↓	A <sub>4</sub>	4↓	2↓	8	4↓	2↓

A<sub>2</sub> & A<sub>3</sub> – No Dominance

A<sub>2</sub> & A<sub>3</sub> – No Dominance

A <sub>3</sub>	6	7	9	8	7
A <sub>4</sub>	4↓	2↓	8↓	4↓	2↓

### A<sub>4</sub> – Dominance

	B <sub>1</sub>	B <sub>2</sub>	B <sub>3</sub>	B <sub>4</sub>	B <sub>5</sub>
A <sub>2</sub>	5	6	3	7	8
A <sub>3</sub>	6	7	9	8	7

### Column Maxima – Maximum

B <sub>1</sub>	B <sub>2</sub>
5	6↑
6	7↑

### B<sub>2</sub> – Dominance

	B <sub>1</sub>	B <sub>3</sub>	B <sub>4</sub>	B <sub>5</sub>
A <sub>2</sub>	5	3	7	8
A <sub>3</sub>	6	9	8	7

**Column Maxima – Maximum**

B <sub>1</sub>	B <sub>2</sub>	B <sub>1</sub>	B <sub>3</sub>	B <sub>1</sub>	B <sub>4</sub>
5	6↑	5↑	3	5	7↑
6	7↑	6	9↑	6	8↑

**B<sub>2</sub> – Dominance**

**No Dominance**

**B<sub>4</sub> – Dominance**

	B <sub>1</sub>	B <sub>3</sub>	B <sub>5</sub>
A <sub>2</sub>	5	3	8
A <sub>3</sub>	6	9	7

**Column Maxima – Maximum**

B <sub>1</sub>	B <sub>2</sub>	B <sub>1</sub>	B <sub>3</sub>	B <sub>1</sub>	B <sub>4</sub>
5	6↑	5↑	3	5	7↑
6	7↑	6	9↑	6	8↑

**B<sub>2</sub> – Dominance**

**No Dominance**

**B<sub>4</sub> – Dominance**

B <sub>1</sub>	B <sub>5</sub>
5	8↑
6	7↑

**B<sub>5</sub> – Dominance**

	B <sub>1</sub>	B <sub>3</sub>
A <sub>2</sub>	5	3
A <sub>3</sub>	6	9

**Row Minima – Minimum**

A <sub>2</sub>	5	↓	3	↓
A <sub>3</sub>	6		9	

**A<sub>2</sub> – Dominance**

**Column Maxima – Maximum**

B <sub>1</sub>	B <sub>3</sub>
6	9↑

**B<sub>1</sub> – Dominance**

**Row Minima – Minimum**

A <sub>2</sub>	5	↓	3	↓
A <sub>3</sub>	6		9	

**A<sub>2</sub> – Dominance**

**Column Maxima – Maximum**

B <sub>1</sub>	B <sub>3</sub>
6	9↑

**B<sub>1</sub> – Dominance**

B<sub>1</sub>

A<sub>3</sub> 6

**Pure Strategy**

**Saddle Point = A<sub>3</sub>B<sub>1</sub>**

**Value of the game = 6**

**Let us Sum Up**

In this unit, the students have learned to understand and solve the Dominance Property

**Check your progress**

1. A mixed strategy game can be solved by \_\_\_\_\_.
  - a. Simplex method
  - b. Hungarian method
  - c. Graphical method
  - d. Degeneracy
2. When the sum of gains of one player is equal to the sum of losses to another player in a game, this situation is known as \_\_\_\_\_.
  - a. two-person game
  - b. Two-person zero-sum game
  - c. zero-sum game
  - d. non-zero-sum game

3. A game is said to be strictly determinable if\_\_\_\_\_.
- a. maximin value equal to minimax value
  - b. maximin value is less than or equal to minimax value
  - c. maximin value is greater than or equal to minimax value
  - d. maximin value is not equal to minimax value

---

### **Glossary**

---

**Dominant property:** If one strategy of a player dominates over the other strategy in all conditions then the later strategy can be ignored.

**The rule of dominance:** It is to reduce the size of payoff matrix. These rule helps in deleting certain rows and columns of the payoff matrix that are inferior (less attractive).

---

### **Answers to check your progress**

---

1.c

2.a

3.a

---

### **Suggested Readings**

---

1. A. Ravindren, Don T. Phillips and James J. Solberg, Operations Research Principles and Practice, John Wiley and Sons, 2nd edition, 2000.
2. Frederick Hillier, Gerald J. Lieberman, Bodhibroto Nag, Preetam Basu, "Introduction to Operation Research", McGraw Hill, 11th edition, ISSN: 9354601200, 2021.

---

## **Block-5: Introduction**

---

**Block-5: Queuing and Simulation** has been divided in to four Units.

**Unit-17: Queuing System** deals with main aspects Queuing System and its components.

**Unit-18: Queuing models: Birth and Death Model** explains about the important aspects of Queuing models: Birth and Death Model and Solved Problems.

**Unit-19: Simulation** deals with main aspects Simulation and its components.

**Unit-20: Simulation Models** describes about Simulation Models and Solved Problems.

In all the units of Block -5 **Queuing and Simulation**, the Check your progress, Glossary, Answers to check your progress and Suggested Reading has been provided and the Learners are expected to attempt all the Check your progress as part of study.

# Unit-17

---

## Queuing System

### STRUCTURE

Overview

Objectives

17.1. Queuing System

Let us Sum Up

Glossary

Answers to check your progress

Suggestions

---

### Overview

In this chapter we are going to deal about the queuing system. It is a theory of mathematics of waiting lines.

---

### Objectives

After studying this unit, the students will be able:

- to understand the queuing system.

---

### 17.1. Queuing System

- Queuing system or theory is the mathematics of waiting lines.
  - It is extremely useful in predicting and evaluating system performance.
  - It is to find the best level of service
  - Analytical modeling (using formulas) can be used for many queues
- #### Characteristics of Queuing Systems
- Customer: refers to anything that arrives at a facility and requires service, e.g., people, machines, trucks, emails, packets, frames.
  - Server: refers to any resource that provides the requested service, e.g., repairpersons, machines, runways at airport, host, switch, router, disk drive, algorithm



System	Customers	Server
Reception desk	People	Receptionist
Hospital	Patients	Nurses
Airport	Airplanes	Runway
Production line	Cases	Case-packer
Road network	Cars	Traffic light
Grocery	Shoppers	Checkout station
Computer	Jobs	CPU, disk, CD
Network	Packets	Router

The Queuing system or theory is described by four elements:

- Input
- Service Mechanism
- Queue Discipline
- Customer's behavior Input
- Size: Infinite or limited
- Arrival Pattern (Poisson Distribution): fixed or random; Measured by Mean arrival rate ( $\lambda$ )
- Service Mechanism
- Size: Number of servers (or channels)
- Service Pattern (Negative Exponential Distribution): fixed or random; Measured by Mean service rate ( $\mu$ )
- Queue Discipline
- First In First Out (FIFO) – Traffic, ATM etc.
- Last In First Out (LIFO) – Emergency: Patient, Ambulance; Customer who comes for first class ticket etc.
- Service in Random Order (SIRO) – Online Ticket booking Customer's behavior
- Balking – A customer may leave the queue because the queue is too long and he has no time to wait, or there isn't sufficient waiting space.

- Reneging – This occurs when a waiting customer leaves the queue due to impatience. He joins the queue (thinking it will move quickly), but gets impatient after some time and then decides to leave.
- Priorities – In certain applications, some customers are served before others regardless of their order of arrival. These customers have priority over others.
- Jockeying – Customers may jockey from one line to another, i.e. move from one line to another.

Kendall's Notation – A / B / S

**A = Arrival rate distribution**

(M for Poisson, D for deterministic, and G for general)

**B = Service rate distribution**

(M for exponential, D for deterministic, and G for general)

**c = Number of servers or channels**

<b>Queuing Model (Kendall Notation)</b>	<b>Example</b>
Simple system (M / M / 1)	Customer service desk in a store
Multiple server (M / M / s)	Airline ticket counter
Constant service (M / D / 1)	Automated car wash
General service (M / G / 1)	Auto repair shop
Limited population (M / M / s / ∞ / N)	An operation with only 12 machines that might break

**Applications of queuing system**

- Customers: Counter like
  - Sales
  - Supermarket
  - Petrol Pump
  - Doctor

- ATM
- Ticketing
- Bank etc.
- Trains: Railway station
- Planes: Airport
- Goods: Manufacturing
- Vehicles: Traffic System

---

### **Let us Sum Up**

---

In this unit, the students have learned to understand the queuing system.

---

### **Check your progress**

---

1. The total opportunity cost matrix is obtained by doing \_\_\_\_\_.
  - a. row operation on row opportunity cost matrix
  - b. column operation on row opportunity cost matrix
  - c. column operation on column opportunity cost matrix
  - d. none of the above
2. A game is said to be fair if \_\_\_\_\_.
  - a. lower and upper values are zero
  - b. only lower value to be zero
  - c. only upper value to be zero
  - d. lower and upper values are not equal to zero
3. In game theory, the outcome or consequence of a strategy is referred to as the
  - a. payoff.
  - b. penalty.
  - c. reward.
  - d. end-game strategy

---

### **Glossary**

---

**Queuing system or theory:** The mathematics of waiting lines in predicting and evaluating system performance to find the best level of

service. Analytical modeling (using formulas) can be used for many queues

**Customer:** Anything that arrives at a facility and requires service, e.g., people, machines, trucks, emails, packets, frames.

**Server:** Any resource that provides the requested service, e.g., repairpersons, machines, runways at airport, host, switch, router, disk drive, algorithm

---

### **Answers to check your progress**

---

1. b
2. a
3. d

---

### **Suggested Readings**

---

1. A. Ravindren, Don T. Phillips and James J. Solberg, Operations Research Principles and Practice, John Wiley and Sons, 2nd edition, 2000.
2. Frederick Hillier, Gerald J. Lieberman, Bodhibroto Nag, Preetam Basu, "Introduction to Operation Research", McGraw Hill, 11th edition, ISSN: 9354601200, 2021.

## Unit -18

### Queuing models: Birth and Death Model

#### STRUCTURE

Overview

Objectives

18.1. Queuing models: Birth and Death Model

18.2. Solved Problems

Let us Sum Up

Check your progress

Glossary

Answers to your progress

Suggestions

---

#### Overview

---

This gives an overall view of the birth and death model of queuing.

---

#### Objectives

---

After studying this unit, the students will be able

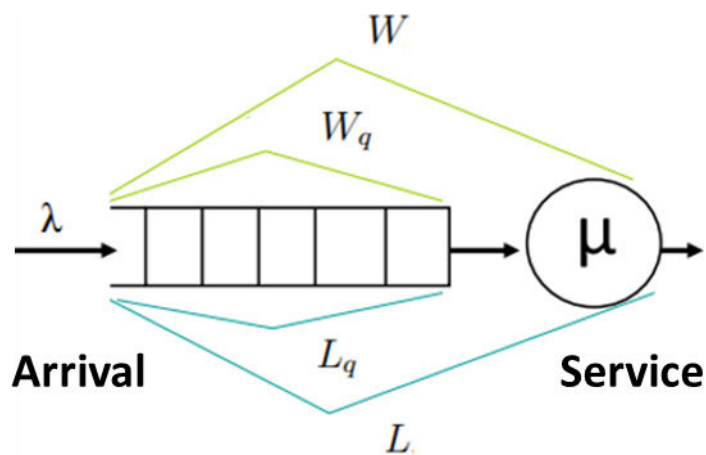
- to understand and solve the queuing models: Birth and Death Model

---

#### 18.1. Queuing models: Birth and Death Model

---

In queueing theory the birth–death process is the most fundamental example of a queueing model, the M/M/C/K (in complete Kendall's notation) queue. This is a queue with Poisson arrivals, drawn from an infinite population, and C servers with exponentially distributed service times with K places in the queue.



### Single Server Queuing System (M/M/1)

- Poisson arrivals
- Arrival population is unlimited
- Exponential service times
- All arrivals wait to be served
- $\lambda$  is constant
- $\mu > \lambda$  (average service rate > average arrival rate)

Measuring Queue Performance –  $\rho$ ;  $L_q$ ;  $L$ ;  $W_q$ ;  $W$   $\rho$  = utilization factor

$$\rho = \frac{\lambda}{\mu}$$

(probability of all servers being busy)

---

### 18.2. Solved Problems

---

**Customers arrive at a sales counter manned by a single person according to a poisson process with a mean rate of 20 per hour. The time required to serve a customer has an exponential distribution with a mean of 30 per hour. Determine**

- **Average queue length of a customer.**
- **Average waiting time of a customer.**

**Given:**

- Mean Arrival rate ( $\lambda$ ) = 20 per hour
- Mean Service rate ( $\mu$ ) = 30 per hour Calculate:
- Average queue length of a customer ( $L_q$ )
- Average waiting time of a customer ( $W_q$ )

$$\rho = \frac{\lambda}{\mu}$$

$\rho$  = Utilization factor

Average queue length of a customer ( $L_q$ )

$$L_q = \frac{\rho^2}{1 - \rho}$$

Average waiting time of a customer ( $W_q$ )

$$W_q = L_q/\lambda$$

---

### Let us Sum Up

---

In this unit, the students have learned to understand and solve the queuing models: Birth and Death Model

---

### Check your progress

---

1. Games without saddle point require players to play
    - a. mixed strategies
    - b. pure strategies
    - c. both (a) and (b)
    - d. none of these
  2. To find the optimal solution, we apply \_\_\_\_\_
    - a. LPP
    - b. VAM
    - c. MODI Method
    - d. Rim
  3. For maximization in TP , the objective is to maximize the total \_\_\_\_\_
    - a. Solution
    - b. Profit Matrix
    - c. Profit
    - d. None of the above
- 

### Glossary

---

**Birth–death queueing model:** The most fundamental example of a queueing model, the M/M/C/K (in complete Kendall's notation) queue. This is a queue with Poisson arrivals, drawn from an infinite population, and C servers with exponentially distributed service times with K places in the queue.

---

**Answers to check your progress**

---

1.c

2.c

3.c

---

**Suggested Readings**

---

1. A. Ravindren, Don T. Phillips and James J. Solberg, Operations Research Principles and Practice, John Wiley and Sons, 2nd edition, 2000.
2. Frederick Hillier, Gerald J. Lieberman, Bodhibroto Nag, Preetam Basu, "Introduction to Operation Research", McGraw Hill, 11th edition, ISSN: 9354601200, 2021.



# Unit-19

## Simulation

### STRUCTURE

Overview

Objectives

19.1. Simulation

Let us Sum Up

Check your progress

Glossary

Answer to check your progress

Suggestions

### Overview

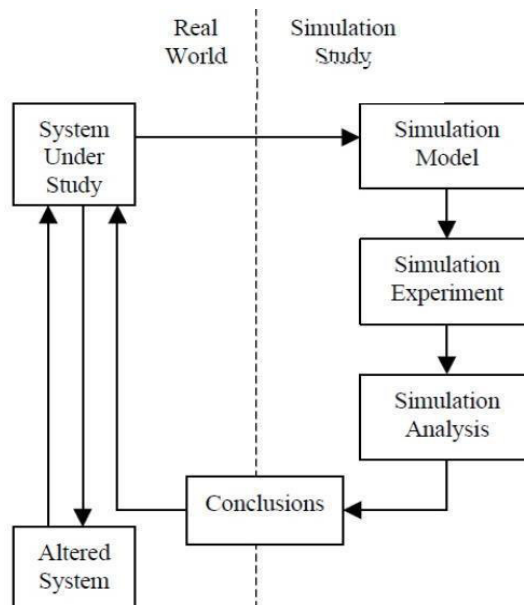
It is a process of simulation of a real life situation.

### Objectives

After studying this unit, the students will be able:

- to understand the simulation.

### 19.1. Simulation



- Simulation is the imitation of the operation of a real-world process or system over time.

- Simulation is the process of designing a model of a real system and conducting experiments with this model for the purpose of either understanding the behavior of the system and/or evaluating various strategies for the operation of the system.

### **The types of Simulation**

Based on State variable is Known or Uncertainty

1. Deterministic (Known )
2. Stochastic (Uncertainty – Probabilistic) Based on time evolution in the model
3. Static (Time evolution is not important)
4. Dynamic (Time evolution is important) Based on changes in the state of the system
5. Continuous System (changes in the state of the system occur only at discrete points in time)
6. Discrete System (changes in the state of the system occur only at discrete points in time)

### **Advantages of simulation**

- Simulation is flexible and straightforward technique.
- It is useful in solving problems where all values of the variables are either not known or partially known.
- It can be used to analyze large and complex real world system that cannot be solved by conventional quantitative techniques models.
- In situations where it is difficult to predict or identify bottlenecks, Simulation is used to foresee these unknown difficulties.
- The simulation approach is useful to study a problem that involves uncertainty.
- It can be used to study existing systems without disrupting the ongoing operations.
- Proposed systems can be “tested” before committing resources.
- Simulation allows us to identify bottlenecks.

- Simulation allows us to gain insight into which variables are most important to system performance.

### **Applications of simulation**

- Manufacturing facility
  - Designing and analyzing manufacturing systems
  - Evaluating a new military weapons system or tactics
  - Determining ordering policies for an inventory system
- Bank or other personal-service operation
  - Analyzing financial or economic systems
- Transportation/logistics/distribution operation
  - Designing and operating transportation facilities such as freeways, airports, subways, or ports
- Hospital facilities (emergency room, operating room, admissions), Fast-food restaurant, Supermarket
  - Evaluating designs for service organizations such as hospitals, post offices, or fast-food restaurants
- Computer network
  - Designing communications systems and message protocols for them
- Chemical plant

---

### **Let us Sum Up**

---

In this unit, the students have learned to understand the simulation

---

### **Check your progress**

---

1. When managers find standard queuing formulas inadequate or the mathematics unsolvable, they often resort to \_\_\_\_\_ to obtain their solutions
  - a. One
  - b. VAM
  - c. Simulation
  - d. None of the above

2. In the standard queuing model, we assume that the queue discipline is \_\_\_\_\_
  - a. First come, first served
  - b. Last come, first served
  - c. First come, last served
  - d. None of the above
3. The service time in the M/M/1 queuing model is assumed to be \_\_\_\_\_
  - a. Negative exponentially distributed
  - b. Positively distributed
  - c. Normal distribution
  - d. None of the above

---

## **Glossary**

---

**Simulation:** The process of designing a model of a real system and conducting experiments with this model for the purpose of either understanding the behavior of the system and/or evaluating various strategies for the operation of the system.

---

## **Answers to check your progress**

---

1. c
2. a
3. a

---

## **Suggested Readings**

---

1. Gupta. P. K, Man Mohan, Kanti Swarup: "Operations Research", Sultan Chand, 2008.
2. Goddard L.S., "Mathematical techniques of Operational Research", Elsevier, 2014.
3. Sharma J. K., "Operations Research Theory & Applications", Macmillan India Limited, fifth edition.2013

# Unit-20

## Simulation Models

---

### STRUCTURE

Overview

Objectives

20.1. Simulation Models

20.2. Solved Problems

Let us Sum Up

Check your progress

Glossary

Answers to check your progress

Suggestions

---

### Overview

---

In this unit we are going to deal with probabilistic and discrete models.

---

### Objectives

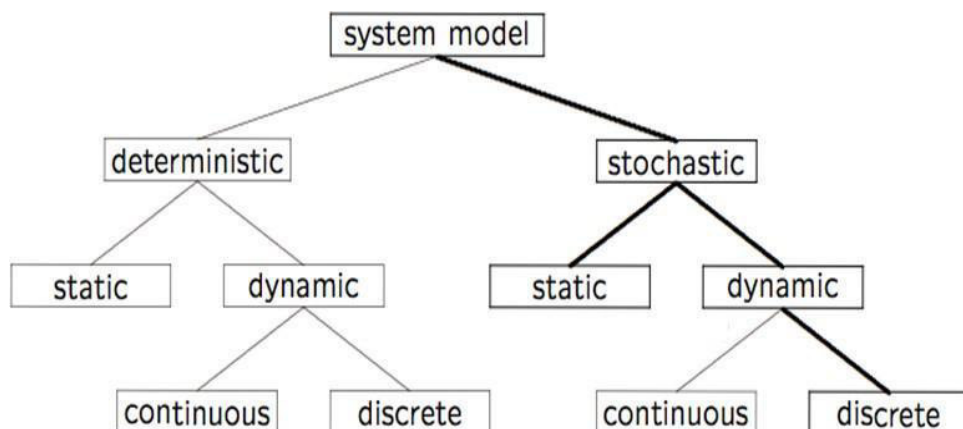
---

After studying this unit, the students will be able to understand and solve the simulation models.

---

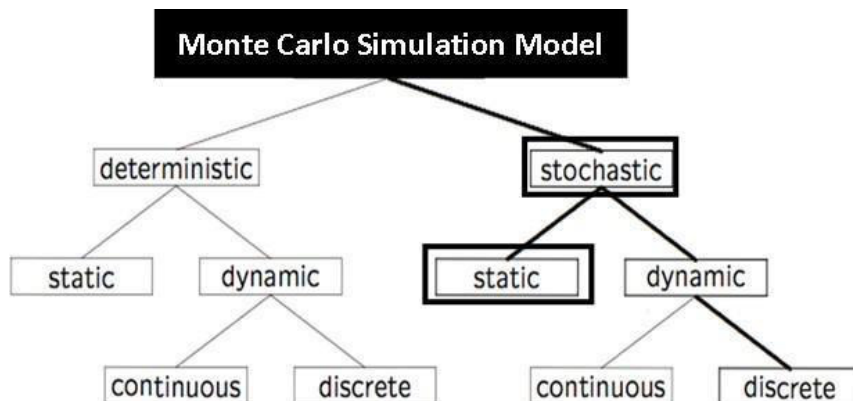
### 20.1. Simulation Models

---



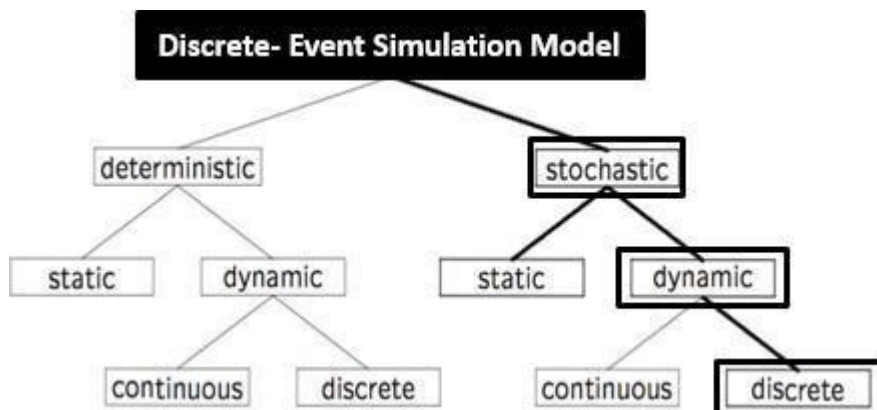
- Simulation model is a representation of a real system.
- Simulation is the process of designing a model of a real system and conducting experiments with this model.

## Monte Carlo Simulation Model



- Monte Carlo is sampling method based upon probability distribution and the use of random numbers.
- Stochastic (Uncertainty – Probabilistic)
- Static (Time evolution is not important)

## Discrete-Event Simulation Model



- A discrete-event simulation is one where changes in the state of the system occur instantaneously at random points in time as a result of the occurrence of discrete events.
- Stochastic (Uncertainty – Probabilistic)
- Dynamic (Time evolution is important)
- Discrete System (changes in the state of the system occur only at discrete points in time)

### Solved Problems

The Lajwaab Bakery Shop keeps stock of a popular brand of cake. Previous experience indicates the daily demand as given below:

Daily demand	Probability
0	0.01
15	0.15
25	0.20
35	0.50
45	0.12
50	0.02

Consider the following sequence of random numbers: 21, 27, 47, 54, 60, 39, 43, 91, 25, 20. Using this sequence, simulate the demand for the next 10 days. Find out the stock situation, if the owner of the bakery shop decides to make 30 cakes every day. Also estimate the daily average demand for the cakes on the basis of simulated data.

Using the daily demand distribution, we obtain a probability distribution as shown in the following table.

**Table 1**

Daily demand	Probability	Cumulative probability	Random Numbers
0	0.01	0.01	0
15	0.15	0.16	1-15
25	0.20	0.36	16-35
35	0.50	0.86	36-85
45	0.12	0.98	86-97
50	0.02	1.00	98-99

At the start of simulation, the first random number 21 generates a demand of 25 cakes as shown in table 2.

The demand is determined from the cumulative probability values in table

1. At the end of first day, the closing quantity is 5 (30-25) cakes. Similarly, we can calculate the next demand for others.

**Table 2**

Demand	Random Numbers	Next demand	Daily production = 30 cakes	
			Left out	Shortage
1	21	25	5	
2	27	25	10	
3	47	35	5	
4	54	35	0	
5	60	35		5
6	39	35		10
7	43	35		15
8	91	45		30
9	25	25		25
10	20	25		20
<b>Total</b>		<b>320</b>		<b>10</b>

Total demand = 320

Average demand = Total demand/no. of days

The daily average demand for the cakes =  $320/10 = 32$  cakes.

---

### **Let us Sum Up**

---

In this unit, the students have learned to understand and solve the simulation models.

---

### **Check your progress**

---

1. Simulation is a technique usually reserved for studying only the simplest and most straightforward of problems.
  - a. True
  - b. False
2. A simulation model is designed to arrive at a single specific numerical answer to a given problem.
  - a. True
  - b. False
3. Simulation typically requires a familiarity with statistics to evaluate the results.
  - a. True
  - b. False



---

## **Glossary**

---

**Monte Carlo simulation:** Sampling method is based upon probability distribution and the use of random numbers.

**Discrete-event simulation:** One where changes in the state of the system occur instantaneously at random points in time as a result of the occurrence of discrete events.

---

## **Answers to check your progress**

---

1. b

2.b

3.a

---

## **Suggested Readings**

---

1. Gupta. P. K, Man Mohan, Kanti Swarup: "Operations Research", Sultan Chand, 2008.
2. Goddard L.S., "Mathematical techniques of Operational Research", Elsevier, 2014.
3. Sharma J. K., "Operations Research Theory & Applications", Macmillan India Limited, fifth edition.2013

## **Annexure-Case studies**

---

### **Case Study -1**

Techway is an established company in the field of Robotics creating AI based solutions for its clients. The company has a state of the art R&D department in collaboration with a Japanese firm as part of its strategic alliance. In order to fulfill the mandatory CSR procedure of New Companies law 2013, Techway started a initiative in rural schools. The project was about the use of robots in class rooms for children with learning problems. The project was a huge success and lot of schools approached the company for its assistance in implementation of the project in their schools. As it was a CSR initiative, the company was not able to generate revenue through the project. The project manager approaches the GM of the company to discuss the issue. The project manager presents a clear view about how the project was started from CSR perspective and how it is consuming their resources now. The project manager suggests to complete the initiative while the GM wants to continue it as it has considerably increased the goodwill of the company.

### **Questions**

1. Is it advisable to stop the initiative now?
2. How feasible it is to commercialize this venture?

### **Case Study - 2**

Susrutha Meditech is a pharma company with a considerable market share in Asia Pacific. BiotechIndia is a research lab agency which works on new drug development. Susrutha approaches Biotech India to develop an indigenous drug for curing skin cancer based on Indian herbs. Biotech would just act as a consultant on payment basis while the rest would be taken care by Susrutha. The team member, Mr. Jose of this cancer drug had come up with a break through innovation during the project which would help in preventing the growth of all types of cancer cells. M. Jose knows very well if Sustrutha Company comes to know of this, they would get the entire patent and would not allow Biotech to take credit nor generate revenue.

### **Questions**

1. What action would you suggest for Biotech India now?
2. As susrutha Meditech is the project sponsor, should the innovation be made known to them?

### Case Study - 3

Info Global is an ITES company based in Delhi. The company had bagged a project from Government of India related to cyber security. Varun is a senior java Architect who is included in the project team. The team leader is an experienced new hand from Singapore branch of Info Global. The team leader is new to the Indian environment, especially to the Government procedures. As GOI is the sponsor for this project, there are lot of delays and bottlenecks in the 145 project due to red tapism. Varun identifies that the new team lead is having a tough time with the sponsor. He is also aware of the intensity and value of the project.

#### Questions

1. As a senior programmer, should Varun escalate the problem to the management?
2. Is it right on Varun's part to lend a helping hand to the new team lead to sort out things?
3. Offer your suggestions for the timely completion of the project.

### Case Study - 4

A project comprising of eight tasks (A to H) has the following characteristics:

Tasks Preceding Tasks Time duration in weeks

Optimistic Most Likely Pessimistic

A -2, 4 ,12

B -10, 12 ,26

C- A, 8 ,9 ,10

D- A, 10 ,15, 20

E- A, 7, 7.5 ,15

F- B,C, 9, 9, 9

G- D, 3, 3.5, 7

H- E,F,G, 5, 5, 5

#### Questions

1. Draw the network diagram and carry out all related calculations.
2. Determine the critical path and mark it in the network.
3. What is the total project duration?

### Case Study - 5

Read well is a bookstore which sells all genres of books. It the advent of e-commerce , the company wants to open its online book store and also develop an app for purchase. This project is given to the company doit.com.

#### Question

1. As the team leader of this project, prepare a project charter for the launching of the project.

### Case Study - 6

Using the minimax criterion find the optimal strategies for the players in the following game.

		Player B				
		8	10	13	16	9
Player A	7	7	12	6	15	10
	9	9	18	9	13	25
	4	4	9	8	20	6
	8	8	10	13	16	9

### Case Study - 7

A machine costs Rs. 6000/-. The running cost and the resale value (salvage value) at the end of the year is given below.

Year	1	2	3	4	5	6	7
Operating maintenance cost	1200	1400	1600	1800	2000	2400	3000
Resale value	4000	2666	2000	1500	1000	600	600

#### Question

1. Find when the machine is to be replaced?

### Case Study - 8

Solve the following assignment problem using Hungarian method. The matrix entries represent the processing times in hours.

		OPERATOR				
		1	2	3	4	5
JOB	1	9	11	14	11	7
	2	6	15	13	13	10
	3	12	13	6	8	8
	4	11	9	10	12	9
	5	7	12	14	10	14

### Case Study - 9

Find the initial basic feasible solution of a transportation problem using Vogel's Approximation method

Destination					
	D1	D2	D3	D4	Supply
Source					
S1	190	300	500	100	<b>70</b>
S2	700	300	400	600	<b>90</b>
S3	400	100	600	200	<b>180</b>
Demand	<b>50</b>	<b>80</b>	<b>70</b>	<b>140</b>	<b>340</b>

### Case Study -10

The automobile company manufactures around 100 cars. The production is more accurately described by the probability distribution given below.

Production per day	Probability
95	0.03
96	0.05
97	0.07
98	0.10
99	0.15
100	0.20
101	0.15
102	0.10
103	0.07
104	0.05
105	0.03

The finished cars are transported in a specially arranged lorry accommodating 101 cars.

- (a) What will be the average number of cars waiting in the factory?
- (b) What will be the average number of empty spaces in the lorry?

Using the following random numbers 68, 75, 29, 94, 08, 74, 36, 47, 31, 78, 38, 59, 91, 06, 31. Simulate the process.

Model End Semester Examination Question Paper

**Master of Business Administration (MBA)**

Course Code: **DCMBA-21**/ Course Title: **Quantitative Techniques**

**Max. Marks: 70**

**Time: 3 hours**

**PART – A (10x2 =20 Marks)**

Answer any **TEN** questions out of TWELVE questions

[All questions carry equal marks]

- (1).Organize and list few applications of Operations research.
- (2).List the characteristics of Operations Research.
- (3).What are the different types of solving Linear Programming Problem (LPP)?
- (4).Explain the difference between transportation and assignment problems.
- (5).What is unbalanced AP? How to resolve it?
- (6).Define Network analysis.
- (7).Distinguish between PERT and CPM.
- (8).What is Game theory?
- (9).List out the methods for solving the game problem.
- (10).What is saddle point?
- (11).What are the uses of simulation?
- (12).Write the characteristics of queuing theory.

**PART – B (5X8=40 Marks)**

Answer any **FIVE** questions out of SEVEN questions

[All questions carry equal marks]

- (13).Solve the following LPP problem using graphical method

$$\text{Maximise } Z = 12X_1 + 16X_2$$

$$\text{Subject to } 10X_1 + 20X_2 \leq 120$$

$$8X_1 + 8X_2 \leq 80$$

$$X_1, X_2 \geq 0$$

- (14).Calculate basic feasible solution of a transportation problem using North West Corner rule.

<b>Destination</b>				
	<b>D1</b>	<b>D2</b>	<b>D3</b>	<b>Supply</b>
<b>Source</b>				
<b>S1</b>	2	7	4	<b>5</b>
<b>S2</b>	3	3	1	<b>8</b>
<b>S3</b>	5	4	7	<b>7</b>
<b>S4</b>	1	6	2	<b>14</b>
<b>Demand</b>	<b>7</b>	<b>9</b>	<b>18</b>	<b>34</b>

(15). Find the initial basic feasible solution of a transportation problem using Least cost method .

	Destination				
	D1	D2	D3	D4	Supply
Source					
S1	1	2	3	4	6
S2	4	3	2	0	8
S3	0	2	2	1	10
Demand	4	6	8	6	24

(16). A project scheduling has the following characteristics

Activity	Time in days
1 - 2	4
1 - 3	1
2 - 4	1
3 - 4	1
3 - 5	6
4 - 9	5
5 - 6	4
5 - 7	8
6 - 8	1
7 - 8	2
8 - 10	5
9 - 10	7

Prepare Network using CPM and determine critical path, duration and total float.

(17). Solve the following game

	Player B			
Player A	12	1	30	-10
	20	3	10	5
	-5	-2	25	0
	15	-4	10	6

(18). Discuss the solution of the following game

	Player B			
Player A	8	2	9	5
	6	5	7	18
	7	3	-4	10

(19).The automobile company manufactures around 150 scooters. The daily production varies from 146 to 154 depending upon the availability of raw materials and other working conditions.

<b>Production per day</b>	<b>Probability</b>
146	0.04
147	0.09
148	0.12
149	0.14
150	0.11
151	0.10
152	0.20
153	0.12
154	0.08

The finished scooters are transported in a specially arranged lorry accommodating 150 scooters. Using the following random numbers 80, 81, 76, 75, 64, 43, 18, 26, 10, 12, 65, 68, 69, 61, 57. Simulate the process to find out

- (i).What will be the average number of scooters waiting in the factory?
- (ii).What will be the average number of empty spaces in the lorry?

**PART - C (1x10=10 Marks)**

**CASE STUDY (Covering the Whole Course)**

(20).Assign the four tasks to four operators. Solve the following assignment problem using Hungarian method.

		<b>OPERATORS</b>			
		<b>1</b>	<b>2</b>	<b>3</b>	<b>4</b>
<b>TASKS</b>	<b>A</b>	20	28	19	13
	<b>B</b>	15	30	31	28
	<b>C</b>	40	21	20	17
	<b>D</b>	21	28	26	12



### Document Information

---

Analyzed document	slm modified 22DCMBA21 QUANTITATIVE TECHNIQUES.docx (D164336606)
Submitted	4/18/2023 3:31:00 PM
Submitted by	Thirumagal
Submitter email	tmagal.sms@velsuniv.ac.in
Similarity	7%
Analysis address	tmagal.sms.vels@analysis.arkund.com

### Sources included in the report

---

**W**

URL: <https://mrcet.com/downloads/MBA/digitalnotes/Quantitative%20Analysis%20for%20Business%20Decisi...>  
Fetched: 10/24/2021 12:15:38 PM



30

## **SWAYAM PRABHA**

The SWAYAM PRABHA is a group of 40 DTH channels devoted to telecasting of high-quality educational programmes on 24X7 basis using the GSAT-15 satellite. Every day, there will be new content for at least (4) hours which would be repeated 5 more times in a day, allowing the students to choose the time of their convenience. The channels are uplinked from BISAG-N, Gandhinagar. The contents are provided by IITs, UGC, CEC, IGNOU. The INFLIBNET Centre maintains the web portal.

**Open and Distance Learning (ODL) students of Vels Institute of Science, Technology and Advanced Studies(VISTAS)** are advised to use the SWAYAM PRABHA (A good initiative of Ministry of Education, Government of India) as part of supplementary learning materials in addition to the Self Learning Materials(SLM) supplied to the students.

Open and Distance Learning (ODL) students of VISTAS can also visit <https://swayamprabha.gov.in/> and under Higher Education can view the videos uploaded in the website.



# SWAYAM PRABHA

An initiative by Ministry of Education

SWAYAM PRABHA is a group of 40 channels devoted to telecasting of high-quality educational programmes on 24X7 basis using the GSAT-15 satellite

Connect with us

<https://www.swayamprabha.gov.in/>



Feedback /Queries  
+91 7604974865



SMS Service  
Call Us Now  
+91 800992222



Mobile App

*Turning every TV into classroom because education is not a privilege, but a Right*

- With atleast 4 hours of fresh content repeated about 5 times daily, students have the privilege of choosing the viewing time as per their convenience
- Content creation is coordinated by IITs, CEC, IGNOU & UoH.
- BISAG-N uplinking the 40 SWAYAM PRABHA channels
- INFLIBNET centre maintains the SWAYAM PRABHA web portal
- AI - enabled SMS based schedule retrieval system
- 1.2 Lakhs + videos cover curriculum based course contents of UG/PG level of divers discipline including technical, non-technical & competitive exams
- SWAYAM PRABHA channels can be accessed through DDFree Dish | Dish TV | JiO Mobile App
- Archive videos & programme schedule for all channels
- Learn from eminent professors at your home
- IIT PAL: To assist the students for classes 11 and 12, who are aspiring to join IITs

#### Our Partners



#### Contact

Office of the Chief Coordinator  
MSB 150, Department of Chemical Engineering  
Indian Institute of Technology Madras  
E-mail: [swayamproiitm@dth.ac.in](mailto:swayamproiitm@dth.ac.in)

## SWAYAM Prabha Channels Information



Channel Number	Channel Description
Channels 01 – 10 & 40 are managed by <b>CEC, New Delhi.</b>	
1	Language and Literature
2	History, Culture & Philosophy
3	Social & Behavioral Sciences
4	Education and Home Science
5	Information, Communication and Management Studies
6	Law and Legal Studies
7	Economics and Commerce
8	Physical and Earth Sciences
9	Life Sciences
10	Applied Sciences
40	Arts/Literature, Social Science, Management and other Professional Courses, Natural and Applied Science
Channels 11 to 16 are Managed by <b>IGNOU, New Delhi</b>	
11	Social Sciences & Humanities
12	Basic and Applied Sciences
13	Professional Education
14	State Open Universities and Gyandarshan
15	Capacity Building and Teacher Education
16	Skill and Vocational Education
Channels 17 to 20 are managed by <b>IIT Bombay</b>	
17	Biotechnology and Biochemical Engineering
18	Electronics and Communication Engineering
19	Electrical Engineering
20	Physics

<b>Channels 21 to 22 are managed by IIT Delhi</b>	
21	Textile Engineering
22	IIT PAL (JEE competition assistance)
<b>Channels 23 is managed by IIT Gandhinagar</b>	
23	Civil Engineering
<b>Channels 24 to 28 are managed by IIT Kanpur</b>	
24	Aeronautical Engineering
25	Humanities and Social Sciences
26	Management, Law, Economics; Business Analytics, Communication, Cooperative Management
27	Mechanical Engineering, Engineering Design, Manufacturing E & T and allied subjects
28	Visual communications, Graphic design, Media technology
<b>Channels 29 to 30 are managed by IIT Kharagpur</b>	
29	Architecture & Interior Design.
30	Computer Sciences Engineering / IT & Related Branches
<b>Channels 31 to 35 are managed by IIT Madras</b>	
31	Instrumentation, Control and Biomedical and Engineering
32	Bridge Courses, Impact Series
33	Chemical Engineering, Nanotechnology, Environmental and Atmospheric Sciences
34	Health Sciences
35	Metallurgical and Material Science Engineering, Mining and Ocean Engineering
36	Skills and Logistics (IT - Enabled Sector, Banking, Financial and Insurance sector Skills Logistics, Supply Chain Management and Transportation, Life skills)
<b>Channels 37 to 38 are managed by IIT Tirupati</b>	
37	Chemistry, Biochemistry and Food Processing Engineering
38	Mathematics
<b>Channels 39 is managed by University of Hyderabad and National Sanskrit University</b>	
39	Performing Arts (Indian Classical Music and Dances), Theatre Arts, Film making and Painting



# SATHEE

## Self Assessment, Test and Help for Entrance Exams for Competitive Exams



Mentoring and live sessions from the students of Premier colleges of India



Video Lectures for Subject experts



Comprehensive E-Study Material



Test Series: All India Mock Tests Topic wise, Subject wise, Weekly Test



Discussion Forum & Problem solutions



Learning material available in English + 12 Regional languages

English

हिन्दी

বাংলা

मराठी

తెలుగు

മലയാളം

ਪੰਜਾਬੀ

ಕನ್ನಡ

ગુજરાતી

اردو

ಕನ್ನಡೆ

ଓଡ଼ିଆ

অসমীয়া



Sathee on App Store



Sathee on Play Store



Sathee Website

## SATHEE is **LIVE** on **SWAYAM PRABHA!!** DTH CHANNELS SATHEE (COMPETITIVE EXAM)



CH 01: SATHEE-ENGINEERING  
IIT Kanpur  
▶ LIVE ▶ PROGRAM SCHEDULE



CH 02: SATHEE-MEDICAL  
IIT Kanpur  
▶ LIVE ▶ PROGRAM SCHEDULE



CH 04: SATHEE-AGRICULTURAL  
IIT Kanpur  
▶ LIVE ▶ PROGRAM SCHEDULE



CH 07: SATHEE-RRB  
(Railway)  
IIT Kanpur  
▶ LIVE ▶ PROGRAM SCHEDULE



CH 03: SATHEE-LAW  
IIT Kanpur  
▶ LIVE ▶ PROGRAM SCHEDULE



CH 05: SATHEE-SSC  
IIT Kanpur  
▶ LIVE ▶ PROGRAM SCHEDULE



CH 06: SATHEE-BANK  
IIT Kanpur  
▶ LIVE ▶ PROGRAM SCHEDULE



<https://swayamprabha.gov.in/index.php/about/competitive>

+91-8953463074

prutor@iitk.ac.in

<https://sathee.prutor.ai>

*Marching Beyond 30 Years Successfully*

*43 Institutions, 36,000 Students 6000 Staff Members*



# VELS



INSTITUTE OF SCIENCE, TECHNOLOGY & ADVANCED STUDIES (VISTAS)  
(Deemed to be University Estd. u/s 3 of the UGC Act, 1956)

PALLAVARAM - CHENNAI

[www.vistas.ac.in](http://www.vistas.ac.in)



## VELS

**MEDICAL COLLEGE & HOSPITAL**  
Under VELS INSTITUTE OF SCIENCE, TECHNOLOGY & ADVANCED STUDIES (VISTAS)

(Deemed to be University Estd. u/s 3 of the UGC Act, 1956)

Uthukottai Taluk, Tiruvallur District - 601 102

[www.velsmedicalcollege.com](http://www.velsmedicalcollege.com)



## MAHAVIR INSTITUTE OF MEDICAL SCIENCES (MIMS)

VIKARABAD, HYDERABAD- TELANGANA

[www.mahavirmedicalcollege.org](http://www.mahavirmedicalcollege.org)



## SRI VENKATESWARA DENTAL COLLEGE & HOSPITAL

Thalambur, Chennai

[www.svdentalcollege.com](http://www.svdentalcollege.com)



## MEGHNA INSTITUTE OF DENTAL SCIENCES (MIDS)

NIZAMABAD, HYDERABAD - TELANGANA

[www.meghnadentalcollege.com](http://www.meghnadentalcollege.com)



## VEL NURSING COLLEGE

Under VELS INSTITUTE OF SCIENCE, TECHNOLOGY & ADVANCED STUDIES (VISTAS)

(Deemed to be University Estd. u/s 3 of the UGC Act, 1956)

[www.velnursingcollege.com](http://www.velnursingcollege.com)



## VENKATESWARA NURSING COLLEGE

Thalambur, Chennai

[www.venkateswaranursing.ac.in](http://www.venkateswaranursing.ac.in)



## VELS VIDYASHRAM

CBSE

Pallavaram - Thalambur - Cantonment

[www.velsvidyashram.com](http://www.velsvidyashram.com)



## VELS GLOBAL SCHOOL

TAMIL NADU | KARNATAKA | DELHI - NCR | WEST BENGAL

[www.velsglobalschool.com](http://www.velsglobalschool.com)



## VAELS

**INTERNATIONAL SCHOOL**

KKIC / CISCE / CAMBRIDGE INTERNATIONAL  
NEELANKARAI - INJAMBAKKAM

[www.vaelsinternationalschool.com](http://www.vaelsinternationalschool.com)



## KINDLE KIDS INTERNATIONAL SCHOOL

SLF Building, 510 Thomson Road #B2-00, Singapore

[www.kindlekids.sg](http://www.kindlekids.sg)



## VELS KINDER KIDS

No. 9, Dr. Ranga Road,  
Mylapore, Chennai

[www.velskinderkids.com](http://www.velskinderkids.com)



South Croydon, Greater London  
[www.ctc.ac.uk](http://www.ctc.ac.uk)



## SHRI ISARI VELAN MISSION HOSPITAL

*A Comfort Care Centre*

150 Bedded Multi Speciality Hospital

[www.velanhospital.com](http://www.velanhospital.com)